



Name _____ Class _____ Date _____

1 An _____ is any animal that **eats both plants and other animals**.

- A octopus
- B octagon
- C omnivore
- D oomph-loompa



2 _____ are remains of an animal or plant **preserved in rock**.

- A Magnets
- B Planets
- C Satellites
- D Fossils



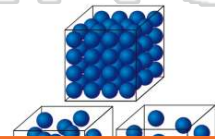
3 **Cold-blooded animals with scales** are _____.

- A reptiles
- B mammals
- C birds



4 **Solid, liquid, and gas** are three forms of _____.

- A fun
- B matter
- C manner



PREVIEW

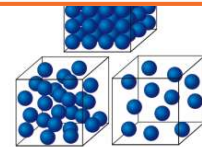
Please [Sign In](#) or [Sign Up](#) to download the printable version of this worksheet

7

- A Evaporation
- B Condensation
- C Precipitation
- D Hibernation



- A names
- B places
- C seasons
- D properties




9 **Water rising as vapor and falling as rain or snow** is the _____.

- A food chain
- B water cycle
- C hurricane
- D shower



10 A **tool to measure heat and cold** is a _____.

- A microscope
- B telescope
- C thermometer
- D tornado





ANSWER KEY

An _____ is any animal that **eats both plants and other animals.**

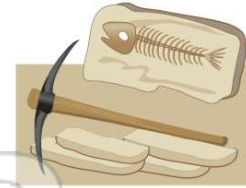
- A octopus
- B octagon
- C omnivore
- D oomph-loompa



(c)

_____ are remains of an animal or plant **preserved in rock.**

- A Magnets
- B Planets
- C Satellites
- D Fossils



(d)

Cold-blooded animals with scales are

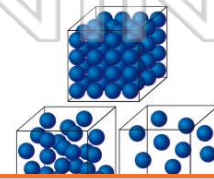
- A reptiles
- B mammals
- C birds
- D natural



(a)

Solid, liquid, and gas are three forms of _____.

- A fun
- B matter
- C manner
- D vapor



(b)



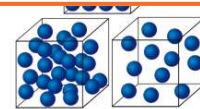
PREVIEW

Please [Sign In](#) or [Sign Up](#) to download the printable version of this worksheet

- C Precipitation
- D Hibernation

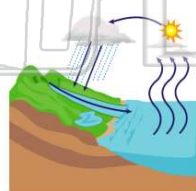


- B places
- C seasons
- D properties



Water rising as **vapor** and falling as **rain** or **snow** is the

- A food chain
- B water cycle
- C hurricane
- D shower



(b)

A **tool to measure heat and cold** is a _____.

- A microscope
- B telescope
- C thermometer
- D tornado



(c)