



Name _____ Class _____ Date _____

1 The number of people who like **apples best** is _____.

- A 4
- B 7
- C 10
- D 14

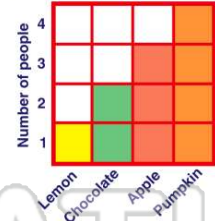
Favorite Fruit

Fruit	Number of People
apple	4
grapes	7
melon	10
banana	14

2 The number of people who like **lemon pie best** is _____.

- A 1
- B 2
- C 3
- D 4

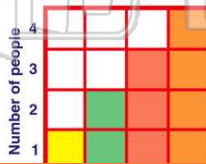
Favorite Pies



3 The number of people who like **chocolate pie best** is _____.

- A 1
- B 2
- C 3
- D 4

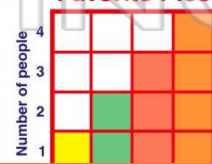
Favorite Pies



4 The number of people who like **apple pie best** is _____.

- A 1
- B 2
- C 3
- D 4

Favorite Pies

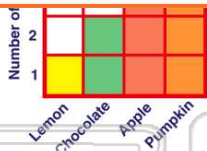


PREVIEW

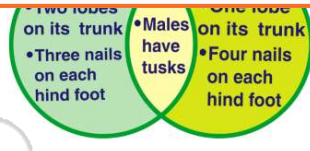
Please [Sign In](#) or [Sign Up](#) to download the printable version of this worksheet

7

- C 10
- D 12



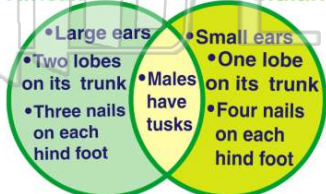
- American
- D Greek



9 **Both African and Indian** male elephants have tusks.

- A true
- B false

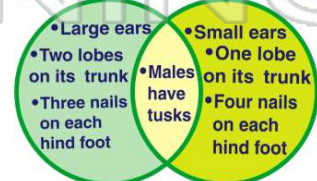
African Elephants Indian



10 How many **nails** does an **Indian elephant** have on each hind foot?

- A 1
- B 2
- C 3
- D 4

African Elephants Indian





ANSWER KEY

The number of people who like **apples best** is _____.

- A** 4
- B** 7
- C** 10
- D** 14

Favorite Fruit

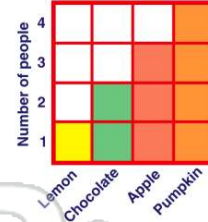
Fruit	Number of People
apple	4
grapes	7
melon	10
banana	14

(a)

The number of people who like **lemon pie best** is _____.

- A** 1
- B** 2
- C** 3
- D** 4

Favorite Pies

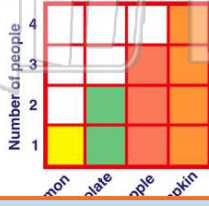


(a)

The number of people who like **chocolate pie best** is _____.

- A** 1
- B** 2
- C** 3
- D** 4

Favorite Pies



(b)

The number of people who like **apple pie best** is _____.

- A** 1
- B** 2
- C** 3
- D** 4

Favorite Pies



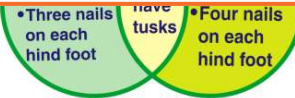
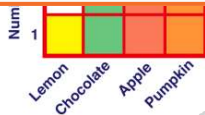
(c)



PREVIEW

Please [Sign In](#) or [Sign Up](#) to download the printable version of this worksheet

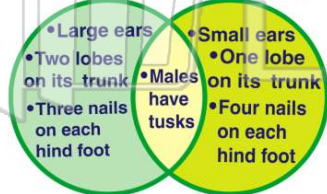
- D** 12



Both African and Indian male elephants have tusks.

- A** true
- B** false

African Elephants Indian

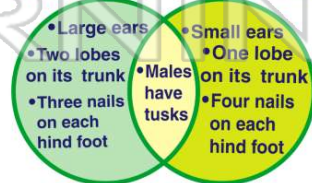


(a)

How many **nails** does an **Indian elephant** have on each hind foot?

- A** 1
- B** 2
- C** 3
- D** 4

African Elephants Indian



(d)