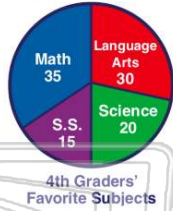




Name _____ Class _____ Date _____

1 **Graphs** and _____ reveal information through mathematical statistics.

- A maps
- B pages
- C charts
- D indexes



2 A _____ shows what each **symbol** on a map represents.

- A camera
- B compass
- C scale
- D legend

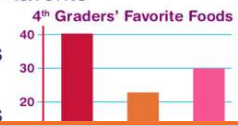


3 A _____ is used to show events in the order that they occurred.

- A index
- B compass
- C timeline
- D legend

4 What information does this **bar graph** show?

- A what the 4th graders' favorite foods are
- B what the 4th graders' favorite games to play are
- C what the 4th graders like to cook
- D what the 4th graders



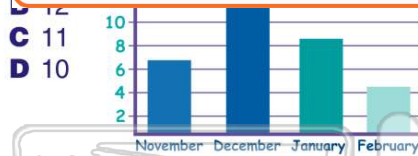
5



PREVIEW

Please [Sign In](#) or [Sign Up](#) to download the printable version of this worksheet

7



- A compass
- B scale
- C index
- D title



9 Which event would be listed **second** on a **timeline**?

- A was born in 1912
- B death in 1993
- C marriage in 1933
- D college graduation 1930

10 When creating a **graph** or **chart** you should always remember to include

- A percentages
- B a title
- C colors
- D lights




Key: 1 🏊 = 2 People



ANSWER KEY

Graphs and _____ reveal information through mathematical statistics.


- A maps
- B pages
- C charts
- D indexes



(C)

A _____ shows what each **symbol** on a map represents.

- A camera
- B compass
- C scale
- D legend



(d)

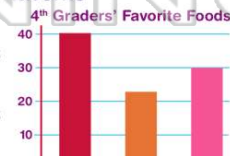
A _____ is used to show events in the order that they occurred.

- A index
- B compass
- C timeline
- D legend

(C)

What information does this **bar graph** show?

- A what the 4th graders' favorite foods are
- B what the 4th graders' favorite games to play are
- C what the 4th graders like to cook
- D what the 4th graders like to watch on TV




(a)



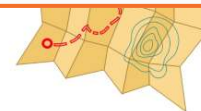
PREVIEW

Please [Sign In](#) or [Sign Up](#) to download the printable version of this worksheet

D 10



- B scale
- C index
- D title



Which event would be listed **second** on a **timeline**?

- A was born in 1912
- B death in 1993
- C marriage in 1933
- D college graduation 1930

(d)

When creating a **graph** or **chart** you should always remember to include

- A percentages
- B a title
- C colors
- D lights

Favorite Summer Activities



(b)

Key: 1 icon = 2 People