



Name _____ Class _____ Date _____

1 What symbol is used to represent county lines on the map?

- A a curvy line
- B a red line
- C a dotted line
- D a solid line



2 On a chart, the **column** _____ tells us what data is in the column.

- A color
- B number
- C heading
- D letters

Pet	# Sold
Fish	12
Hamsters	2
Lizards	4

3 According to the bar graph, how many girls chose soccer as their favorite sport?

- A 21
- B 15
- C 13



4 According to the legend on the map, which city receives the highest amount of snowfall each year?

- A Syracuse
- B Buffalo

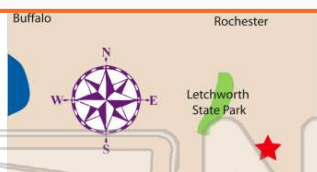


PREVIEW

Please [Sign In](#) or [Sign Up](#) to download the printable version of this worksheet

7 A map shows the location of Letchworth State Park. Which direction is it located?

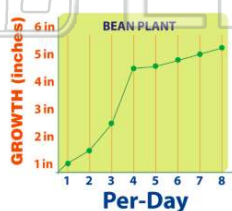
- A North
- B Northwest
- C South
- D East



- B a title
- C a bar
- D shading

9 What does the line graph represent?

- A how many inches the plant grew per day
- B how many centimeters the plant grew per day
- C how many inches the plant grew per hour
- D how many feet the plant grew per week



10 One inch of a road on the map represents _____ miles.

- A 450
- B 50
- C 150
- D 300





ANSWER KEY

What symbol is used to represent county lines on the map?

- A a curvy line
- B a red line
- C a dotted line
- D a solid line



C

On a chart, the **column** _____ tells us what data is in the column.

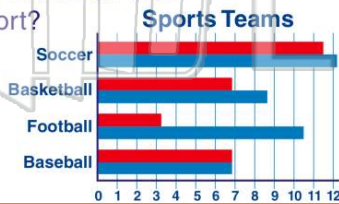
- A color
- B number
- C heading
- D letters

Pet	# Sold
Fish	12
Hamsters	2
Lizards	4

C

According to the bar graph, how many girls chose soccer as their favorite sport?

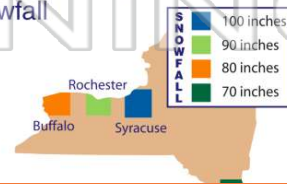
- A 21
- B 15
- C 13
- D 7



C

According to the legend on the map, which city receives the highest amount of snowfall each year?

- A Syracuse
- B Buffalo
- C Rochester



a



PREVIEW

Please [Sign In](#) or [Sign Up](#) to download the printable version of this worksheet

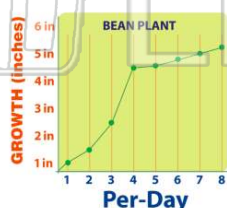
- A South
- B East



- C a bar
- D shading

What does the line graph represent?

- A how many inches the plant grew per day
- B how many centimeters the plant grew per day
- C how many inches the plant grew per hour
- D how many feet the plant grew per week



a

One inch of a road on the map represents _____ miles.

- A 450
- B 50
- C 150
- D 300

C

