



Name _____ Class _____ Date _____

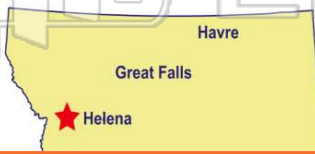
1 What **city** does this chart include information about?

Snowfall in Anchorage, Alaska	
2000	72 feet
2002	68 feet
2004	71 feet

- A Anchorage, Colorado
- B Juneau, Alaska
- C Anchorage, Alaska
- D Alaska

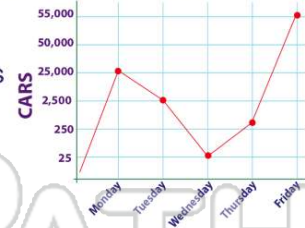
3 What is the capital of Montana?

- A Bozeman
- B Helena
- C Havre
- D Great Falls



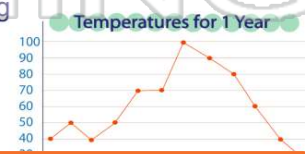
2 According to the line graph, how many cars drove through the toll booth on Tuesday?

- A 25,000 cars
- B 2,500 cars
- C 250 cars
- D 25 cars



4 It is important to read _____ of the information on a chart or graph before drawing conclusions.

- A most
- B none



5
V
b
A
E
C
D



PREVIEW

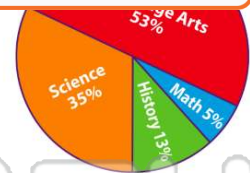
Please [Sign In](#) or [Sign Up](#) to download the printable version of this worksheet

7

Hound	Friday	\$150
-------	--------	-------

- A # of dogs sold at Robin's Pet Store last week
- B # of cats sold at Robin's Per Store
- C price of dogs for sale at Robin's Pet Store
- D # of dogs sold at Robin's Pet Store this week

- A 10%
- B 5%
- C 53%
- D 35%



9 Which European country is not part of the Alps mountain range?

- A Germany
- B Czech Republic
- C Italy
- D Austria



10 What size is the blue #13 jersey?

Color	#	Size
Green	8	Small
Red	10	Medium
Blue	13	Large

- A medium
- B large
- C small
- D x-large



ANSWER KEY

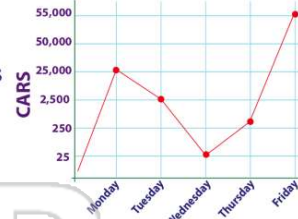
What **city** does this chart include information about?

Snowfall in Anchorage, Alaska	
2000	72 feet
2002	68 feet
2004	71 feet

- A Anchorage, Colorado
- B Juneau, Alaska
- C Anchorage, Alaska
- D Alaska

(C)

According to the line graph, how many cars drove through the toll booth on Tuesday?



- A 25,000 cars
- B 2,500 cars
- C 250 cars
- D 25 cars

(b)

What is the capital of Montana?

- A Bozeman
- B Helena
- C Havre
- D Great Falls



(b)

It is important to read _____ of the information on a chart or graph before drawing conclusions.



- A most
- B none
- C some

(d)



PREVIEW

Please [Sign In](#) or [Sign Up](#) to download the printable version of this worksheet

- A # of dogs sold at Robin's Pet Store last week
- B # of cats sold at Robin's Per Store
- C price of dogs for sale at Robin's Pet Store
- D # of dogs sold at Robin's Pet Store this week

- C 53%
- D 35%



Which European country is not part of the Alps mountain range?

- A Germany
- B Czech Republic
- C Italy
- D Austria



(b)

What size is the blue #13 jersey?

Color	#	Size
Green	8	Small
Red	10	Medium
Blue	13	Large

(b)

- A medium
- B large
- C small
- D x-large