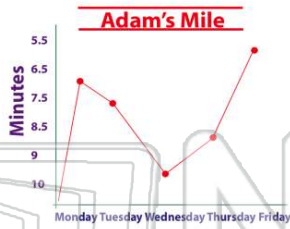




Name _____ Class _____ Date _____

1 According to the line graph, on what day did Adam run the mile the slowest?

- A Monday
- B Tuesday
- C Wednesday
- D Friday



2 This map shows the population of the U.S. in the year _____.

- A 2007
- B 2003
- C 2005
- D 2004



3 What day does John have the job of cleaning up?

- A Friday
- B Monday

Name	Day	Job
Amy	Tues.	Water Plants
John	Wed.	Clean Up
Kyle	Thurs.	Get Mail

4 This graph shows how many boys were absent from school.

- A true
- B false



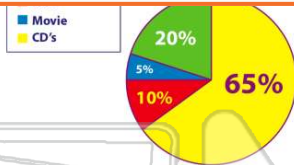
5 If you were to...



PREVIEW

Please [Sign In](#) or [Sign Up](#) to download the printable version of this worksheet

- A 20%
- B 2%
- C 12%
- D 32%



- B inch
- C kilometer
- D mile



9 How tall is A.J. Smith?

Name	Position	Height	Weight
Jack Jones	Linebacker	6'1"	300 lbs.
A.J. Smith	Quarterback	6'3"	225 lbs.
Tyler Knapp	Halfback	6'0"	265 lbs.

- A 6'3"
- B 6'0"
- C 6'1"
- D 5'3"

10 According to the bar graph, what city has an estimated population of 2,850,000 people?

- A Houston
- B Chicago
- C Los Angeles
- D New York City

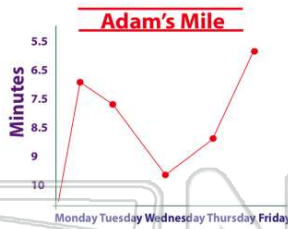




ANSWER KEY

According to the line graph, on what day did Adam run the mile the slowest?

- A Monday
- B Tuesday
- C Wednesday
- D Friday



(C)

This map shows the population of the U.S. in the year _____.

- A 2007
- B 2003
- C 2005
- D 2004



(b)

What day does John have the job of cleaning up?


- A Friday
- B Monday
- C Tuesday
- D Wednesday

Name	Day	Job
Amy	Tues.	Water Plants
John	Wed.	Clean Up
Kyle	Thurs.	Get Mail

(d)

This graph shows how many boys were absent from school.

- A true
- B false



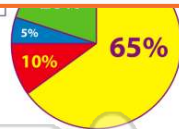
(b)



PREVIEW

Please [Sign In](#) or [Sign Up](#) to download the printable version of this worksheet

- C 12%
- D 32%



- C kilometer
- D mile



How tall is A.J. Smith?

Name	Position	Height	Weight
Jack Jones	Linebacker	6'1"	300 lbs.
A.J. Smith	Quarterback	6'3"	225 lbs.
Tyler Knapp	Halfback	6'0"	265 lbs.

(a)

- A 6'3"
- B 6'0"
- C 6'1"
- D 5'3"

According to the bar graph, what city has an estimated population of 2,850,000 people?

- A Houston
- B Chicago
- C Los Angeles
- D New York City



(b)