



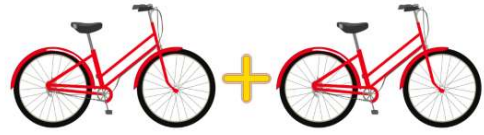
Name _____ Class _____ Date _____

1 Which is right?

- A $5 + 1 = 5$
- B $5 + 1 = 4$
- C $5 + 1 = 6$
- D $5 + 1 = 3$



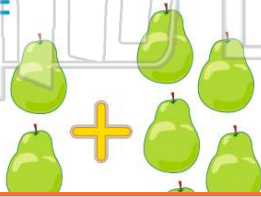
2 $1 + 1 =$



- A 2
- B 0
- C 1
- D 3

3 $2 + 5 =$

- A 3
- B 2
- C 5



4 $2 + 1 =$

- A 2
- B 3
- C 4



5



PREVIEW

Please [Sign In](#) or [Sign Up](#) to download the printable version of this worksheet

7

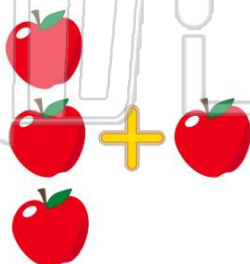
- A $4 + 1 = 3$
- B $4 + 1 = 4$
- C $4 + 1 = 5$
- D $4 + 1 = 6$

- A 6
- B 8
- C 5
- D 4



9 $3 + 1 =$

- A 5
- B 3
- C 2
- D 4



10 $1 + 6 =$

- A 5
- B 6
- C 7
- D 8

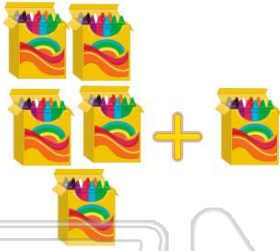




ANSWER KEY

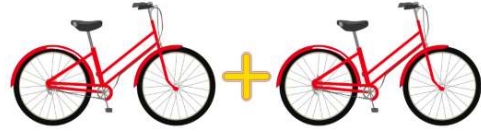
Which is right?

- A $5 + 1 = 5$
- B $5 + 1 = 4$
- C $5 + 1 = 6$
- D $5 + 1 = 3$



(c)

$1 + 1 =$



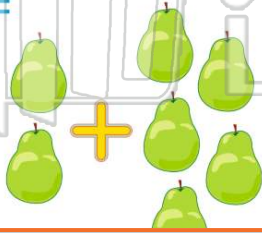
(a)

- A 2
- B 0

- C 1
- D 3

$2 + 5 =$


- A 3
- B 2
- C 5
- D 7



(d)

$2 + 1 =$

- A 2
- B 3
- C 4
- D 0



(b)



PREVIEW

Please [Sign In](#) or [Sign Up](#) to download the printable version of this worksheet


- A $4 + 1 = 3$
- B $4 + 1 = 4$
- C $4 + 1 = 5$
- D $4 + 1 = 6$

- B 8
- C 5
- D 4



$3 + 1 =$

- A 5
- B 3
- C 2
- D 4



(d)

$1 + 6 =$

- A 5
- B 6
- C 7
- D 8



(c)