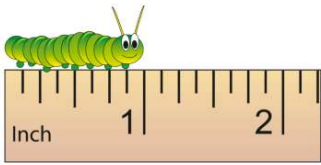




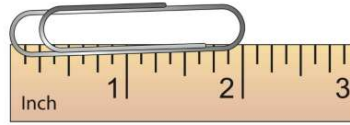
Name _____ Class _____ Date _____

1



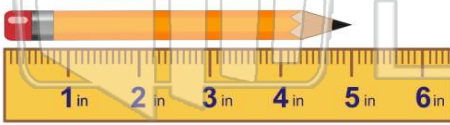
- A $\frac{1}{2}$ inch
- B 1 inch
- C 11 inches
- D 2 inches

2



- A 1 inch
- B $1\frac{1}{2}$ inches
- C 2 inches
- D $2\frac{1}{2}$ inches

3



- A 2 inches
- C 4 inches

4



- A 1 inch
- C 2 inches

5



PREVIEW

Please [Sign In](#) or [Sign Up](#) to download the printable version of this worksheet

7

- C quart
- D liter

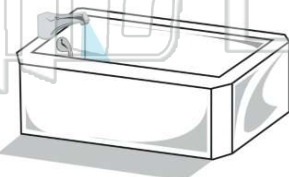


- A 2 inches
- B 3 inches
- C 4 inches
- D 5 inches

9

A bathtub holds _____ than 1 liter.

- A more
- B less



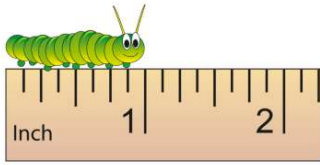
10

Which holds more than 1 pint?

- A
- B
- C
- D



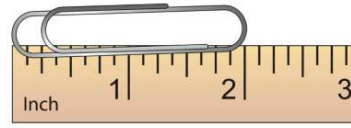
ANSWER KEY



A $\frac{1}{2}$ inch **C** 11 inches

B 1 inch **D** 2 inches

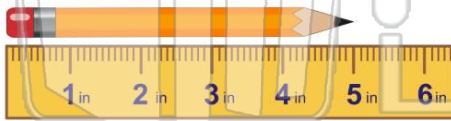
(b)



A 1 inch **C** 2 inches

B $1\frac{1}{2}$ inches **D** $2\frac{1}{2}$ inches

(c)



A 2 inches **C** 4 inches
B 3 inches **D** 5 inches

(d)



A 1 inch **C** 2 inches

(c)



PREVIEW

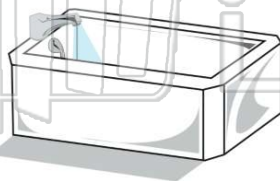
Please [Sign In](#) or [Sign Up](#) to download the printable version of this worksheet

D liter

A 2 inches **C** 4 inches
B 3 inches **D** 5 inches

A bathtub holds _____ than 1 liter.

A more
B less



(a)

Which holds more than 1 pint?



A



B



C



D

(d)