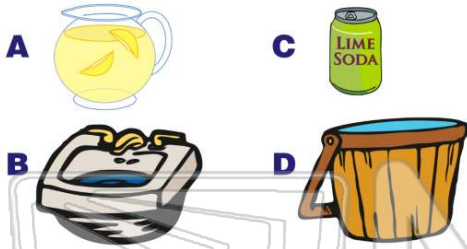




Name _____ Class _____ Date _____

1 Which holds **less than 1 quart**?



2 This **pitcher** holds _____ **1 pint**.

- A more than
- B less than



3 This **sink** holds **1 cup**.

- A more than
- B less than



4 This **jug** holds **1 liter**.

- A more than
- B less than



PREVIEW

7 Please [Sign In](#) or [Sign Up](#) to download the printable version of this worksheet

B less than

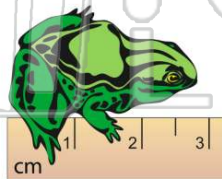


- A 1 centimeter
- B 2 centimeters
- C 3 centimeters
- D 4 centimeters

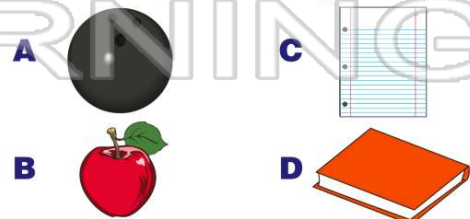


9

- A 3 centimeters
- B 1 centimeter
- C 2 centimeters
- D 4 centimeters



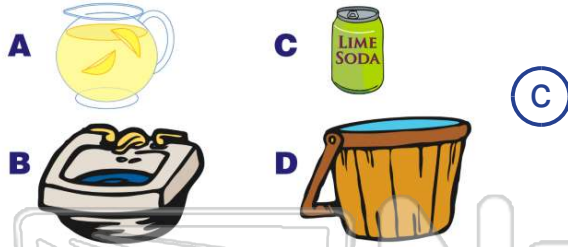
10 Which weighs about **1 gram**?





ANSWER KEY

Which holds **less than 1 quart**?



This **pitcher** holds _____
1 pint.



This **sink** holds _____
1 cup.



This **jug** holds _____
1 liter.

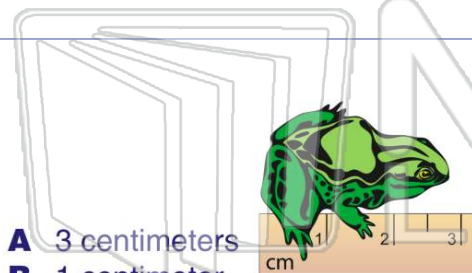


PREVIEW

Please [Sign In](#) or [Sign Up](#) to download the printable version of this worksheet



- B** 2 centimeters
C 3 centimeters
D 4 centimeters



Which weighs about **1 gram**?

