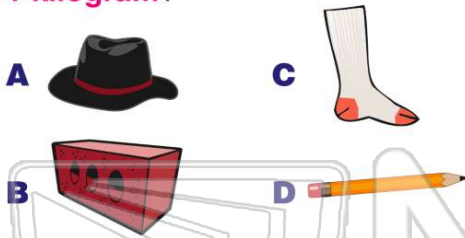




Name _____ Class _____ Date _____

1 Which weighs **more than 1 kilogram**?




- A 1 centimeter
- B $1\frac{1}{2}$ centimeters
- C 2 centimeters

2 A pineapple weighs _____ **1 gram**.

- A more than
- B less than

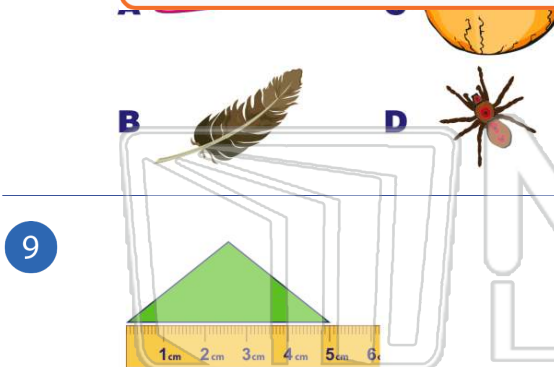


- A 4 centimeters
- B 5 centimeters



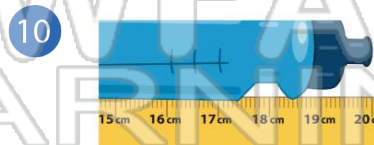
PREVIEW

7 Please [Sign In](#) or [Sign Up](#) to download the printable version of this worksheet



- A 6 centimeters
- B 5 centimeters
- C 4 centimeters
- D 3 centimeters

- A 23 centimeters
- B 12 centimeters
- C 1 centimeter
- D 2 centimeters

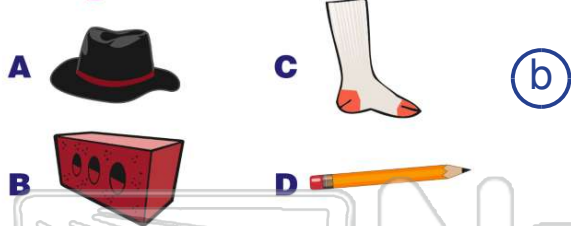


- A 19 centimeters
- B 21 centimeters
- C 20 centimeters
- D 2 centimeters



ANSWER KEY

Which weighs **more** than **1 kilogram**?



A 1 centimeter

B $1\frac{1}{2}$ centimeters

C 2 centimeters

D $2\frac{1}{2}$ centimeters



A pineapple weighs _____ **1 gram**.

A more than
B less than



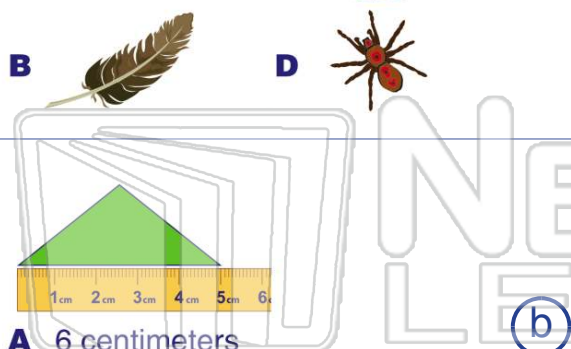
(a)

A 4 centimeters
B 5 centimeters
C 6 centimeters



PREVIEW

Please [Sign In](#) or [Sign Up](#) to download the printable version of this worksheet



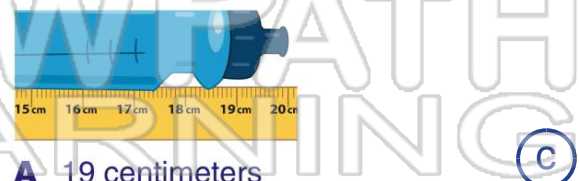
A 6 centimeters

B 5 centimeters

C 4 centimeters

D 3 centimeters

B 12 centimeters
C 1 centimeter
D 2 centimeters



A 19 centimeters

B 21 centimeters

C 20 centimeters

D 2 centimeters