




Ordering Numbers and Objects by Size

Name _____ Class _____ Date _____

1 Which shows **shortest to tallest**?



2 Which order is **correct**?

- A 2 5 3 4 1
- B 1 2 3 4 5
- C 3 4 2 1 5
- D 5 2 3 1 4

3 Which shows **shortest to tallest**?



4 Which order is **correct**?

- A 6 7 8 9 10
- B 10 7 6 8 9
- C 7 9 10 6 8
- D 8 9 7 10 6



PREVIEW

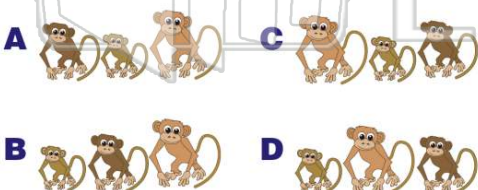
Please [Sign In](#) or [Sign Up](#) to download the printable version of this worksheet

7 Which shows **smallest to biggest**?

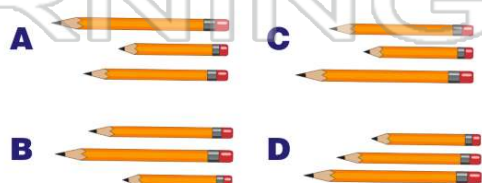


- B 25 36 48 14
- C 14 36 25 48
- D 48 25 36 14

9 Which shows **smallest to biggest**?



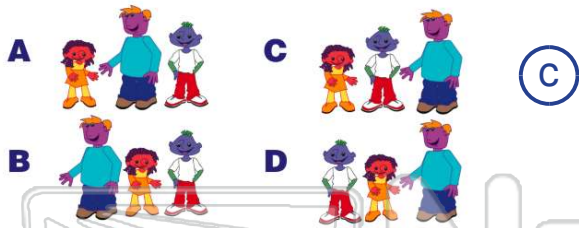
10 Which order is **correct**?





ANSWER KEY

Which shows **shortest to tallest**?



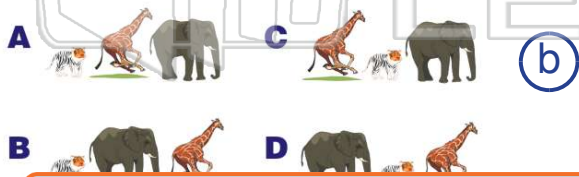
(c)

Which order is **correct**?

- A** 2 5 3 4 1
- B** 1 2 3 4 5
- C** 3 4 2 1 5
- D** 5 2 3 1 4

(b)

Which shows **shortest to tallest**?



(b)

Which order is **correct**?

- A** 6 7 8 9 10
- B** 10 7 6 8 9
- C** 7 9 10 6 8
- D** 8 9 7 10 6

(a)



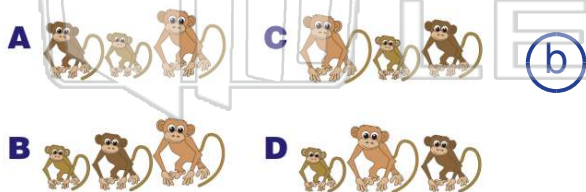
PREVIEW

Please [Sign In](#) or [Sign Up](#) to download the printable version of this worksheet



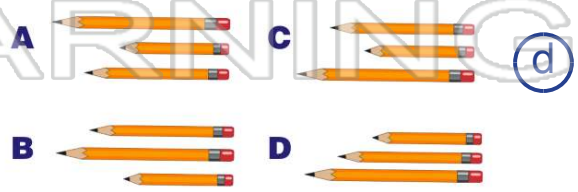
- C** 14 36 25 48
- D** 48 25 36 14

Which shows **smallest to biggest**?



(b)

Which order is **correct**?



(d)