



# Ordering Numbers and Objects by Size

Math  
A

Name \_\_\_\_\_ Class \_\_\_\_\_ Date \_\_\_\_\_

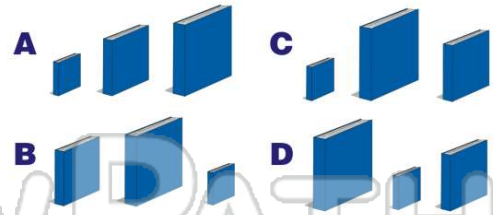
1

Which order is **correct**?

- A 24 13 38 42
- B 13 24 38 42
- C 42 24 13 38
- D 42 13 38 24

2

Which shows **small to big**?



3

Which shows **small to big**?



4

Which shows **smallest to biggest**?




5



## PREVIEW

Please [Sign In](#) or [Sign Up](#) to download the printable version of this worksheet

7



- B 36 45 72 61
- C 45 36 61 72
- D 36 45 61 72

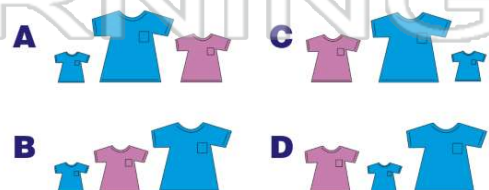
9

Which shows **small to big**?



10

Which shows **smallest to biggest**?





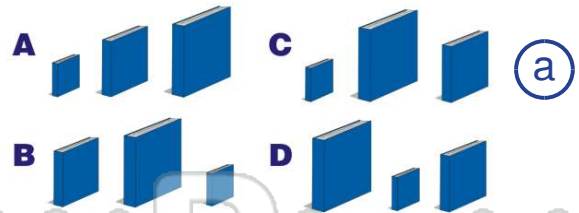
## ANSWER KEY

Which order is **correct**?

- A 24 13 38 42
- B 13 24 38 42
- C 42 24 13 38
- D 42 13 38 24

(b)

Which shows **small to big**?



(a)

Which shows **small to big**?



(c)

Which shows **smallest to biggest**?



(d)



V  
A  
E



## PREVIEW

Please [Sign In](#) or [Sign Up](#) to download the printable version of this worksheet



- C 45 36 61 72
- D 36 45 61 72

Which shows **small to big**?



(d)

Which shows **smallest to biggest**?



(b)

