

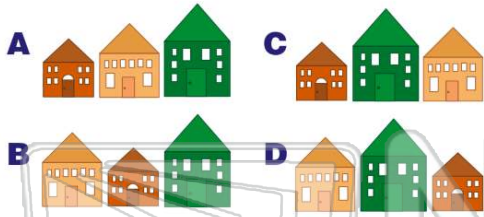


Ordering Numbers and Objects by Size

Math
A

Name _____ Class _____ Date _____


1 Which shows **smallest to biggest**?



3 Which shows **smallest to biggest**?



2 Which shows **smallest to biggest**?




4 Which order is **correct**?

- A 54 65 76 87
- B 65 76 54 87
- C 87 76 54 65
- D 65 54 87 76

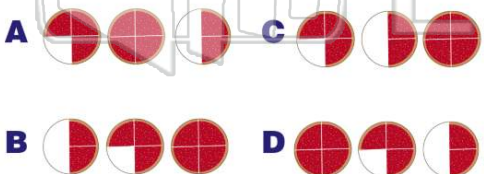


PREVIEW

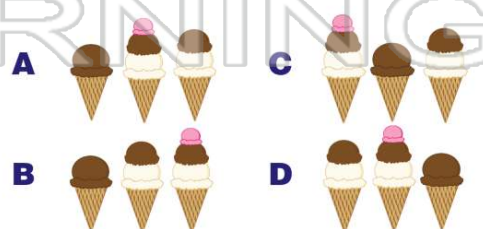
Please [Sign In](#) or [Sign Up](#) to download the printable version of this worksheet



9 Which shows **smallest to biggest**?



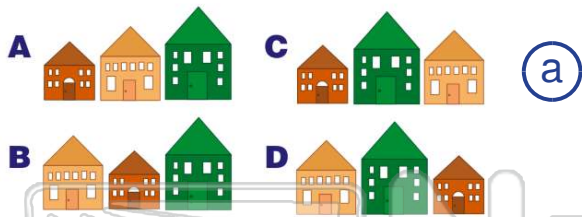
10 Which shows **smallest to biggest**?






ANSWER KEY

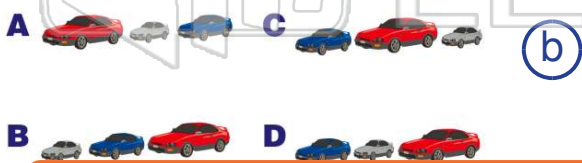
Which shows **smallest to biggest**?



Which shows **smallest to biggest**?



Which shows **smallest to biggest**?



Which order is **correct**?

- A** 54 65 76 87
B 65 76 54 87
C 87 76 54 65
D 65 54 87 76
- (a)

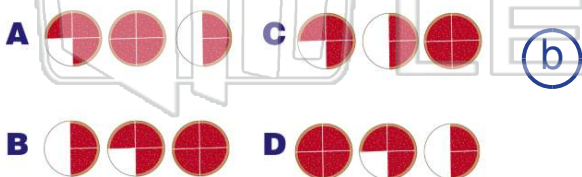


PREVIEW

Please [Sign In](#) or [Sign Up](#) to download the printable version of this worksheet



Which shows **smallest to biggest**?



Which shows **smallest to biggest**?

