



Name \_\_\_\_\_ Class \_\_\_\_\_ Date \_\_\_\_\_

1

Which shape?


- A square
- B circle
- C oval
- D triangle



2

Which shape?

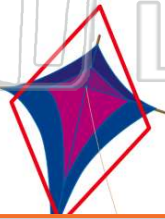
- A square
- B diamond
- C circle
- D rectangle



3

Which shape?

- A circle
- B oval
- C rectangle
- D diamond



4

Which shape?

- A triangle
- B rectangle
- C circle
- D oval



5

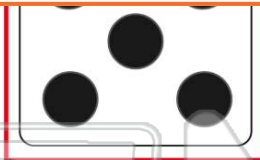


## PREVIEW

7

Please [Sign In](#) or [Sign Up](#) to download the printable version of this worksheet

- C triangle
- D circle



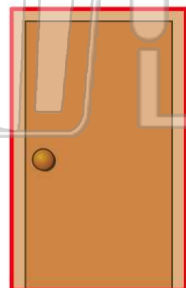
- C oval
- D diamond



9

Which shape?

- A square
- B diamond
- C triangle
- D rectangle



10

Which shape?

- A rectangle
- B triangle
- C circle
- D diamond





## ANSWER KEY

Which shape?


- A square
- B circle
- C oval
- D triangle



(b)

Which shape?


- A square
- B diamond
- C circle
- D rectangle



(a)

Which shape?

- A circle
- B oval
- C rectangle
- D diamond



(d)

Which shape?

- A triangle
- B rectangle
- C circle
- D oval



(c)



## PREVIEW

Please [Sign In](#) or [Sign Up](#) to download the printable version of this worksheet

D circle

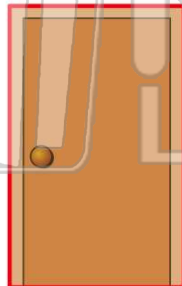


D diamond



Which shape?

- A square
- B diamond
- C triangle
- D rectangle



(d)

Which shape?

- A rectangle
- B triangle
- C circle
- D diamond



(c)