




Name _____ Class _____ Date _____

1 Which shape?



- A rectangle
- B square
- C circle
- D oval

2 Which shape?



- A triangle
- B circle
- C square
- D diamond

3 Which shape?



- A rectangle
- B square
- C triangle
- D circle

4 Which shape?



- A rectangle
- B circle
- C diamond
- D oval

5

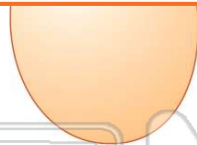


PREVIEW

7

Please [Sign In](#) or [Sign Up](#) to download the printable version of this worksheet

- C rectangle
- D circle



- C rectangle
- D oval



9 Which shape?



- A circle
- B oval
- C square
- D diamond

10 Which shape?



- A square
- B diamond
- C rectangle
- D triangle



ANSWER KEY


Which shape?



- A rectangle
- B square
- C circle
- D oval

(a)

Which shape?



- A triangle
- B circle
- C square
- D diamond

(b)

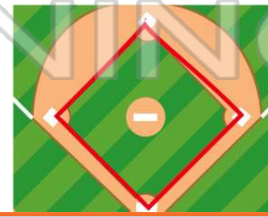
Which shape?



- A rectangle
- B square
- C triangle
- D circle

(d)

Which shape?



- A rectangle
- B circle
- C diamond
- D oval

(c)



PREVIEW

Please [Sign In](#) or [Sign Up](#) to download the printable version of this worksheet

D circle

D oval

Which shape?



- A circle
- B oval
- C square
- D diamond

(c)

Which shape?



- A square
- B diamond
- C rectangle
- D triangle

(d)