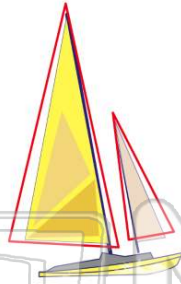




Name \_\_\_\_\_ Class \_\_\_\_\_ Date \_\_\_\_\_


1 Which shape?

- A square
- B triangle
- C rectangle
- D oval




2 Which shape?

- A square
- B rectangle
- C circle
- D triangle



3 Which shape?

- A oval
- B diamond
- C square
- D circle



4 Which shape?

- A rectangle
- B circle
- C square
- D diamond



5



## PREVIEW

7

Please [Sign In](#) or [Sign Up](#) to download the printable version of this worksheet


- C diamond
- D triangle

- C triangle
- D rectangle

9

Which shape?

- A diamond
- B square
- C oval
- D triangle



10

Which shape?

- A square
- B circle
- C triangle
- D diamond

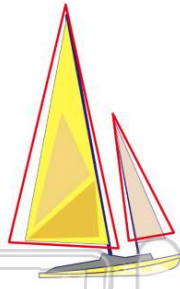




## ANSWER KEY

Which shape?


- A square
- B triangle
- C rectangle
- D oval



(b)

Which shape?

- A square
- B rectangle
- C circle
- D triangle



(d)

Which shape?

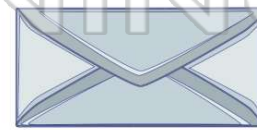
- A oval
- B diamond
- C square
- D circle



(c)

Which shape?

- A rectangle
- B circle
- C square
- D diamond



(a)



## PREVIEW

Please [Sign In](#) or [Sign Up](#) to download the printable version of this worksheet

D triangle

D rectangle

Which shape?

- A diamond
- B square
- C oval
- D triangle



(c)

Which shape?

- A square
- B circle
- C triangle
- D diamond



(d)