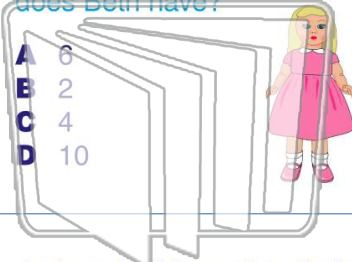




Name \_\_\_\_\_ Class \_\_\_\_\_ Date \_\_\_\_\_

1 Ann has 4 dolls. Beth has 6 more dolls than Ann. How many dolls does Beth have?

- A 6
- B 2
- C 4
- D 10



2 Dan has 3 more trucks than Tim. Tim has 5 trucks. How many trucks does Dan have?

- A 2
- B 3
- C 5
- D 8



3 Jack and Jill have 6 balls in all. Jack has 3. How many balls does Jill have?

4 Sam packed 9 boxes. Kevin packed 5 boxes. How many more boxes did Sam pack than Kevin?

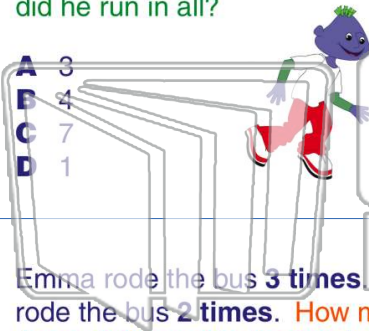


## PREVIEW

Please [Sign In](#) or [Sign Up](#) to download the printable version of this worksheet

7 more blocks. How many blocks did he run in all?

- A 3
- B 4
- C 7
- D 1



8 Will made a stack of 6. Tom made a stack of 9. How many more did Will stack than Tom?

- A 9
- B 6
- C 3
- D 15



9 Emma rode the bus 3 times. Pat rode the bus 2 times. How many times did they ride the bus in all?

- A 1
- B 2
- C 3
- D 5



10 Matt saw 1 fox at the zoo. Alex saw 4 foxes. How many more foxes did Alex see than Matt?

- A 1
- B 3
- C 4
- D 5






Name \_\_\_\_\_ Class \_\_\_\_\_ Date \_\_\_\_\_

1 Ann has 4 dolls. Beth has 6 more dolls than Ann. How many dolls does Beth have?

- A 6
- B 2
- C 4
- D 10



2 Dan has 3 more trucks than Tim. Tim has 5 trucks. How many trucks does Dan have?

- A 2
- B 3
- C 5
- D 8



3 Jack and Jill have 6 balls in all. Jack has 3. How many balls does Jill have?

4 Sam packed 9 boxes. Kevin packed 5 boxes. How many more boxes did Sam pack than Kevin?

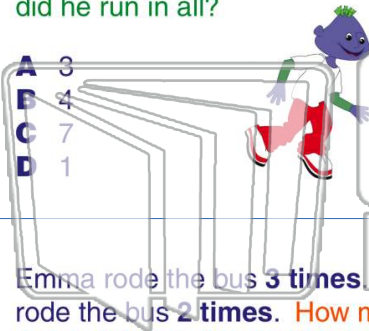


## PREVIEW

Please [Sign In](#) or [Sign Up](#) to download the printable version of this worksheet

7 more blocks. How many blocks did he run in all?

- A 3
- B 4
- C 7
- D 1



8 Will made a stack of 6. Tom made a stack of 9. How many more did Will stack than Tom?

- A 9
- B 6
- C 3
- D 15



9 Emma rode the bus 3 times. Pat rode the bus 2 times. How many times did they ride the bus in all?

- A 1
- B 2
- C 3
- D 5



10 Matt saw 1 fox at the zoo. Alex saw 4 foxes. How many more foxes did Alex see than Matt?

- A 1
- B 3
- C 4
- D 5

