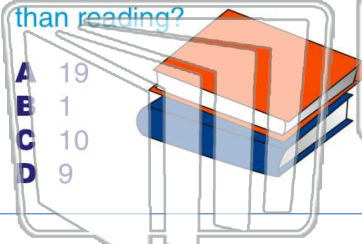





Name \_\_\_\_\_ Class \_\_\_\_\_ Date \_\_\_\_\_

1 Ten kids love math. Nine kids love reading. How many more kids are there who love math than reading?



2 Mike and Jim got 7 fish in all. Jim got 6 fish. How many did Mike get?



3 Don had 5 gum drops. He ate 4 of them. How many gum drops does Don have now?

4 Fran and Jen went and got 2 hot dogs. Fran ate 1 hot dog. How many did Jen eat?



5  
**PREVIEW**  
Please [Sign In](#) or [Sign Up](#) to download the printable version of this worksheet

7 Fran ran in the mud 5 times. How many times did they run in the mud in all?

8 to only 1 shop. How many shops in all?



9 Sam kicks the ball 6 times. Pam kicks the ball 3 times. How many times was the ball kicked in all?

10 Gus had 2 kites. His mom gave him 1 more. How many kites does Gus have now?

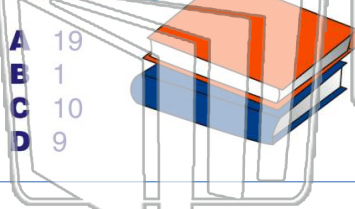




Name \_\_\_\_\_ Class \_\_\_\_\_ Date \_\_\_\_\_


1

Ten kids love math. Nine kids love reading. How many more kids are there who love math than reading?



2

Mike and Jim got 7 fish in all. Jim got 6 fish. How many did Mike get?



3

Don had 5 gum drops. He ate 4 of them. How many gum drops does Don have now?

4

Fran and Jen went and got 2 hot dogs. Fran ate 1 hot dog. How many did Jen eat?

5



## PREVIEW

Please [Sign In](#) or [Sign Up](#) to download the printable version of this worksheet

7

Sam ran in the mud 5 times. Pam ran in the mud 3 times. How many times did they run in the mud in all?



There are 5 shops in town. One shop closed. How many shops are left in all?



9

Sam kicks the ball 6 times. Pam kicks the ball 3 times. How many times was the ball kicked in all?



10

Gus had 2 kites. His mom gave him 1 more. How many kites does Gus have now?

