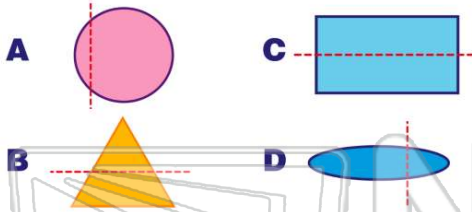


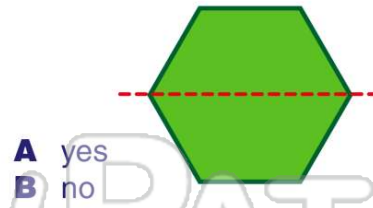


Name _____ Class _____ Date _____

1 Which one shows **symmetry**?

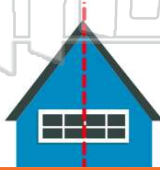


2 Does this show **symmetry**?




A yes
B no

3 Does this show **symmetry**?



4 Does this show **symmetry**?



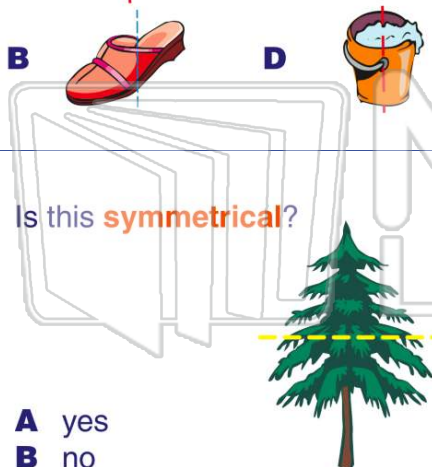
PREVIEW

Please [Sign In](#) or [Sign Up](#) to download the printable version of this worksheet



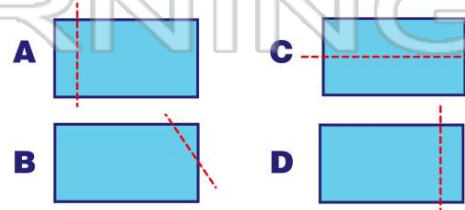
A yes
B no

9 Is this **symmetrical**?



A yes
B no

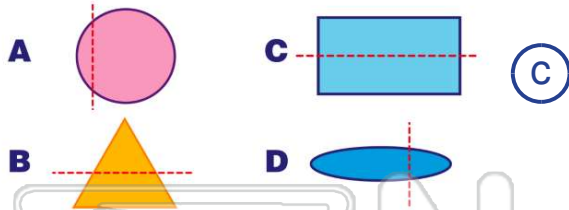
10 Which one shows **symmetry**?



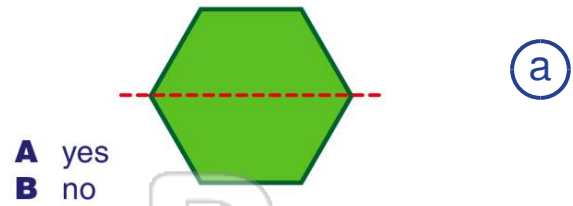


ANSWER KEY

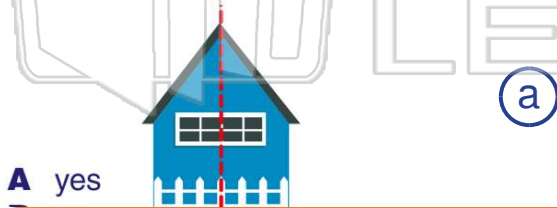
Which one shows **symmetry**?



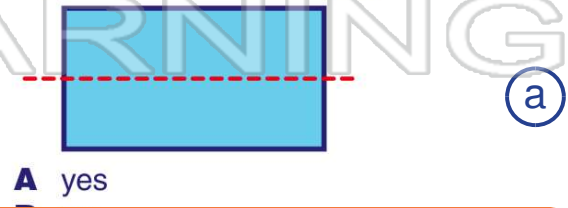
Does this show **symmetry**?



Does this show **symmetry**?

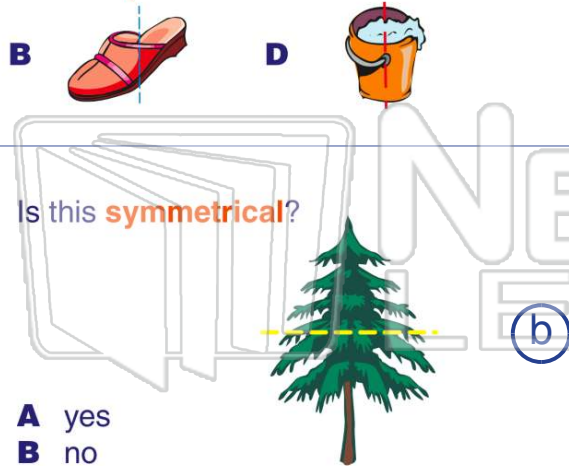


Does this show **symmetry**?



PREVIEW

Please [Sign In](#) or [Sign Up](#) to download the printable version of this worksheet



A yes
B no

Which one shows **symmetry**?

