



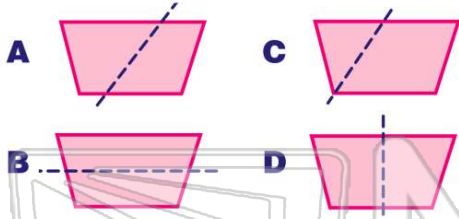
Symmetry

Math
A

Name _____ Class _____ Date _____

1

Which one shows **symmetry**?



3

Which one shows **symmetry**?



5



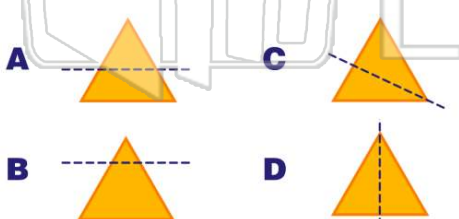
PREVIEW

7

Please [Sign In](#) or [Sign Up](#) to download the printable version of this worksheet

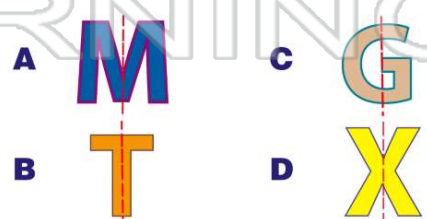
9

Which one shows **symmetry**?



10

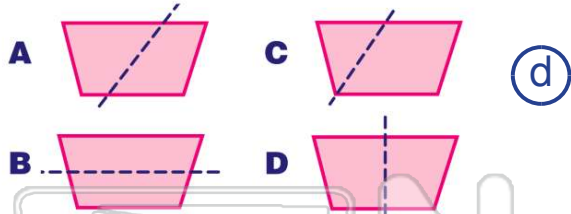
No symmetry.





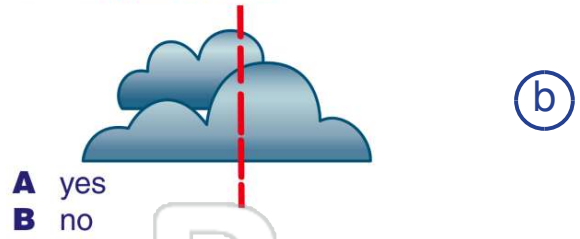
ANSWER KEY

Which one shows **symmetry**?



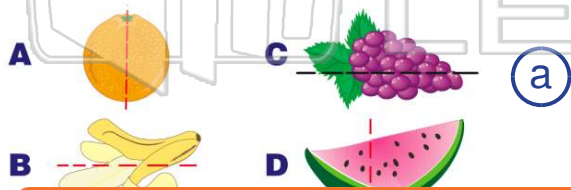
(d)

Is this **symmetrical**?



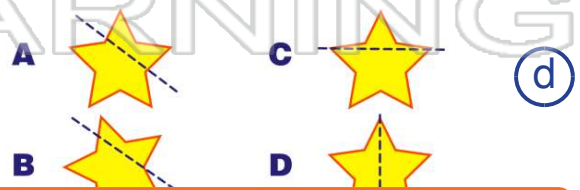
(b)

Which one shows **symmetry**?



(a)

Which one shows **symmetry**?



(d)



PREVIEW

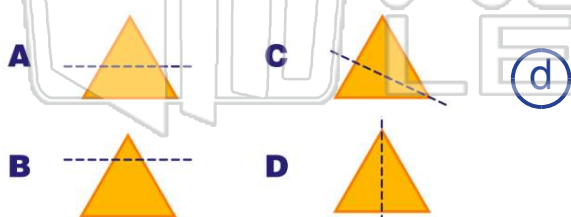
Please [Sign In](#) or [Sign Up](#) to download the printable version of this worksheet



A yes
B no

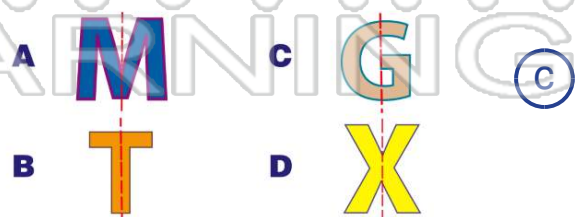


Which one shows **symmetry**?



(d)

No symmetry.



(c)