



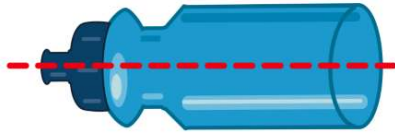
Symmetry

Math
A

Name _____ Class _____ Date _____

1

Does this have **symmetry**?



- A yes
- B no

2

Does this have **symmetry**?



- A yes
- B no

3

Which one shows **symmetry**?



4

Which one shows **symmetry**?



5



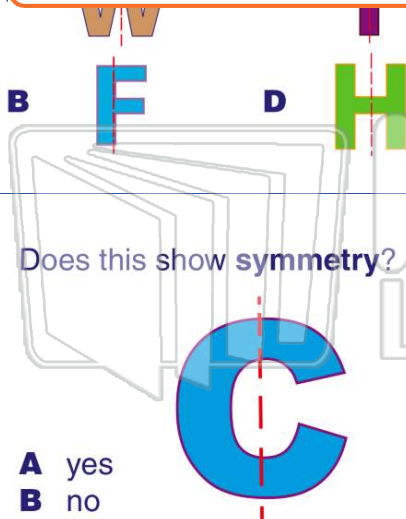
PREVIEW

7

Please [Sign In](#) or [Sign Up](#) to download the printable version of this worksheet

9

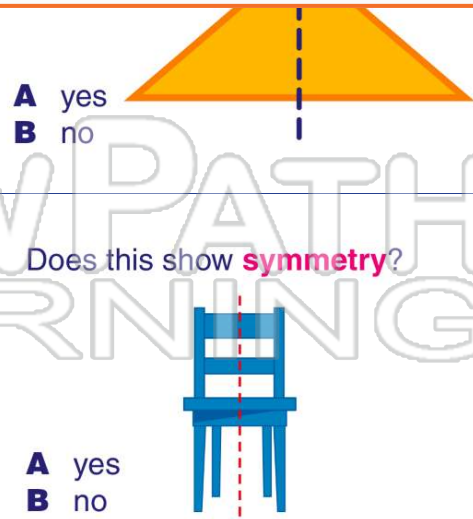
Does this show **symmetry**?



- A yes
- B no

10

Does this show **symmetry**?

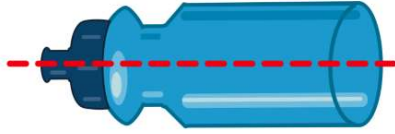


- A yes
- B no



ANSWER KEY

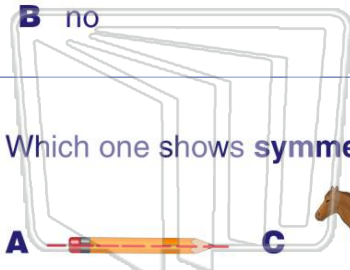
Does this have **symmetry**?



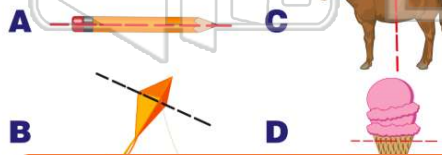
(a)

A yes

B no



Which one shows **symmetry**?



(a)

Does this have **symmetry**?

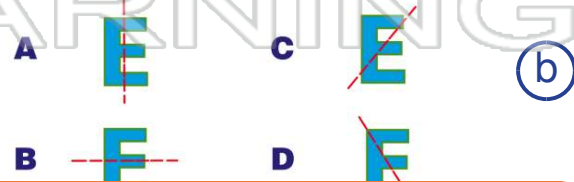


(a)

A yes

B no

Which one shows **symmetry**?



(b)

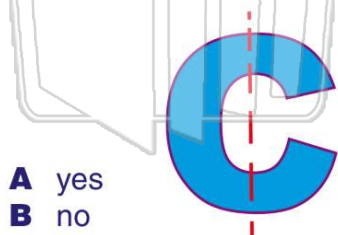


PREVIEW

Please [Sign In](#) or [Sign Up](#) to download the printable version of this worksheet



Does this show **symmetry**?



(b)

A yes

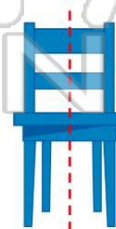
B no

A yes

B no



Does this show **symmetry**?



(a)

A yes

B no