





Name _____ Class _____ Date _____

1 Jon has 9 cents. He finds 8 more cents. He now has 18 cents.



2 I have 11 pencils. I buy 8 more. How many pencils do I have?



3 Jose has 7 cards. Nora gives him 9 more. How many cards does Jose have now?

- A 7
B 2



4 $3 + 9 = \square$



PREVIEW

Please [Sign In](#) or [Sign Up](#) to download the printable version of this worksheet

7

A 8 C 16
B 17 D 11


- A true
B false

9 Lin has 13 marbles. She wants to have 18 marbles. How many more marbles does Lin need?

- A 13 more
B 18 more
C 5 more
D 8 more

	tens	ones
	1	3
+	?	?
	1	8

10 There are 11 birds on a fence. If nine more land on the fence how many birds will be on the fence?






ANSWER KEY


Jon has 9 cents. He finds 8 more cents. He now has 18 cents.

- A true
- B false



(b)

I have 11 pencils. I buy 8 more. How many pencils do I have?



(c)

- A 18
- B 10
- C 19
- D 3

Jose has 7 cards. Nora gives him 9 more. How many cards does Jose have now?

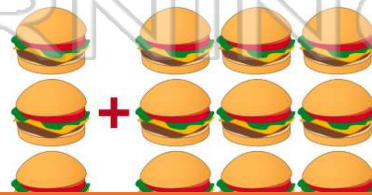
- A 7
- B 2
- C 16



(c)

$3 + 9 = \square$

- A 21
- B 6
- C 39
- D 12



(d)



PREVIEW

Please [Sign In](#) or [Sign Up](#) to download the printable version of this worksheet

A 8 C 16 +

	3
	?

B 17 D 11

- A true
- B false

Lin has 13 marbles. She wants to have 18 marbles. How many more marbles does Lin need?

- A 13 more
- B 18 more
- C 5 more
- D 8 more

	tens	ones
	1	3
+	?	?
	1	8

(c)

There are 11 birds on a fence. If nine more land on the fence how many birds will be on the fence?

- A 21
- B 20
- C 2
- D 19



(b)