



Name _____ Class _____ Date _____

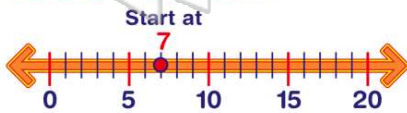
1 Rosa read 13 books. She reads 7 more. Has she read 20 books?

- A yes
B no



tens	ones
1	3
2	0

3 Start at 7. Add 5 more. Add 3 more. Add 2 more. What number are you on?



4 $8 + 3 + 2 = 13$



PREVIEW

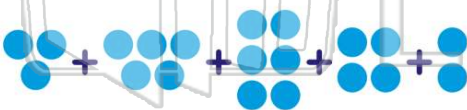
7 Please [Sign In](#) or [Sign Up](#) to download the printable version of this worksheet

- A true
B false

- A yes
B no



9 $3 + 5 + 6 + 4 + 2 =$



- A 21 C 18
B 16 D 20

10 Hong caught 9 fish. Chen caught 4 fish. Mina caught 5 fish. Ling caught 1 fish. How many fish did they catch in all?

- A 9 fish C 19 fish
B 14 fish D 15 fish





ANSWER KEY

Rosa read 13 books. She reads 7 more. Has she read 20 books?

- A yes
- B no

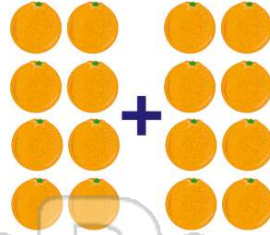


tens	ones
1	3
2	0

(a)

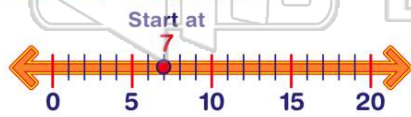
What is double 8?

- A 14
- B 18
- C 15
- D 16



(d)

Start at 7. Add 5 more. Add 3 more. Add 2 more. What number are you on?



- A 16
- C 15

(b)

$$8 + 3 + 2 = 13$$



(a)

- A true



PREVIEW

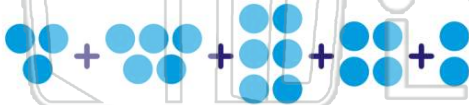
Please [Sign In](#) or [Sign Up](#) to download the printable version of this worksheet

- A true
- B false

- A yes
- B no



$$3 + 5 + 6 + 4 + 2 = \square$$



(d)

- A 21
- B 16
- C 18
- D 20

Hong caught 9 fish. Chen caught 4 fish. Mina caught 5 fish. Ling caught 1 fish. How many fish did they catch in all?

- A 9 fish
- B 14 fish
- C 19 fish
- D 15 fish



(c)