



Name _____ Class _____ Date _____

1 Which is **longer**: a pencil or a ruler?

A pencil
B ruler

2 Which holds **more**: a cup or a bucket?

A bucket
B cup

3 Which weighs **more**: an eraser or a box of crayons?

A eraser
B box of crayons

4 Which weighs **more than** a pound?

A a leaf
B a piece of paper
C a second grader

5

PREVIEW

Please [Sign In](#) or [Sign Up](#) to download the printable version of this worksheet

9 Amina buys a **gallon** of milk and Lin buys **2 quarts**. Which is **true**?

A Amina has more milk.
B Lin has more milk.
C They have the same amount of milk.
D 1 quart = 1 gallon

10 Choose the object that holds the **most water**?

A 2 pints
B 1 quart
C They hold the same amount.

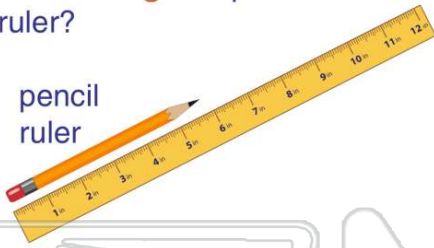
A fish bowl
B swimming pool
C drinking glass
D bathtub



ANSWER KEY

Which is **longer**: a pencil or a ruler?

- A pencil
- B ruler



(b)

Which holds **more**: a cup or a bucket?

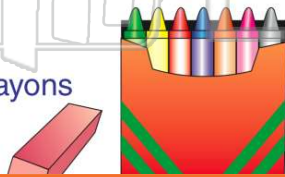
- A bucket
- B cup



(a)

Which weighs **more**: an eraser or a box of crayons?

- A eraser
- B box of crayons



(b)

Which weighs **more than** a pound?

- A a leaf
- B a piece of paper
- C a second grader
- D a sock



(c)



PREVIEW

Please [Sign In](#) or [Sign Up](#) to download the printable version of this worksheet

Amina buys a **gallon** of milk and Lin buys **2 quarts**. Which is **true**?


- A Amina has more milk.
- B Lin has more milk.
- C They have the same amount of milk.
- D 1 quart = 1 gallon



(a)

Choose the object that holds the **most water**?

- A fish bowl
- B swimming pool
- C drinking glass
- D bathtub



(b)