







Name _____ Class _____ Date _____

1 Which is **heavier**: a desk or a chair?

- A desk
- B chair



3 Which is the **shortest**?

- A 
- B 
- C 
- D 

2 Find the correct order from **shortest to longest**.



- A whale, snake, rabbit, caterpillar
- B caterpillar, snake, rabbit, whale
- C caterpillar, rabbit, snake, whale
- D snake, rabbit, caterpillar, whale

4 Would you use a **yard stick** or a **ruler** to measure how long your foot is?

- A yard stick
- B ruler

5

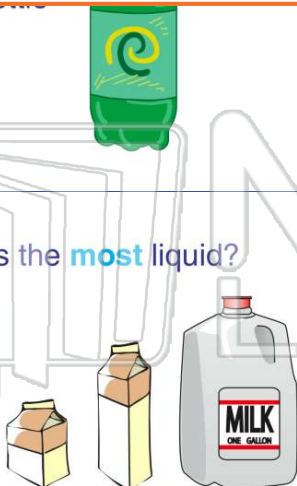


PREVIEW



7 Please [Sign In](#) or [Sign Up](#) to download the printable version of this worksheet

9 Which holds the **most** liquid?

- A pint
- B quart
- C gallon
- D pound



10 Which is **heavier**: a book or a feather?

- A 
- B 

- C 10 meters
- D 100 meters





ANSWER KEY

Which is **heavier**: a desk or a chair?

- A desk
- B chair



(a)



Find the correct order from **shortest to longest**.



- A whale, snake, rabbit, caterpillar
- B caterpillar, snake, rabbit, whale
- C caterpillar, rabbit, snake, whale
- D snake, rabbit, caterpillar, whale

(c)

Which is the **shortest**?

- A 
- B 
- C 
- D 

(a)

Would you use a **yard stick** or a **ruler** to measure how long your foot is?



- A yard stick
- B ruler

(b)



PREVIEW

Please [Sign In](#) or [Sign Up](#) to download the printable version of this worksheet

Which holds the **most** liquid?

- A pint
- B quart
- C gallon
- D pound



(c)

D 100 meters



Which is **heavier**: a book or a feather?

- A 
- B 

(a)