



Name _____ Class _____ Date _____

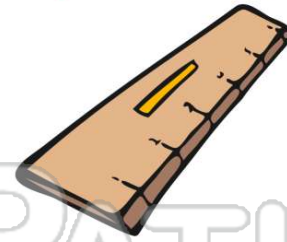
1 Which is **longest**?

- A motorcycle
- B car
- C bike
- D school bus



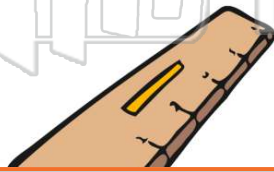
2 Which is **longer**: 1 foot or 1 yard?

- A foot
- B yard



3 Which is **shorter**: an inch or a foot?

- A inch
- B foot



4 Which weighs **more**: a 5 pound bag of sugar or a 10 pound sack of potatoes?

- A 5 pound bag of sugar



PREVIEW

Please [Sign In](#) or [Sign Up](#) to download the printable version of this worksheet





- C pint
- D gallon



- B length of a driveway



9 Which weighs **least**?

- A 
- B 
- C 
- D 

10 Which is **tallest**?

- A door
- B table
- C house
- D window





ANSWER KEY

Which is **longest**?

- A motorcycle
- B car
- C bike
- D school bus

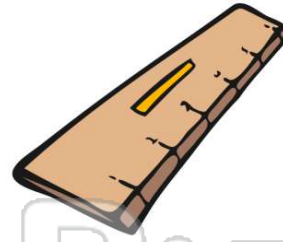
Longest!
Longest!



(d)

Which is **longer**: 1 foot or 1 yard?

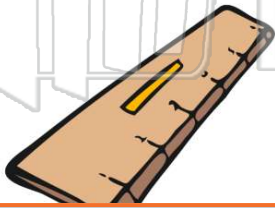
- A foot
- B yard



(b)

Which is **shorter**: an inch or a foot?

- A inch
- B foot



(a)

Which weighs **more**: a 5 pound bag of sugar or a 10 pound sack of potatoes?

- A 5 pound bag of sugar
- B 10 pound bag



(b)



PREVIEW

Please [Sign In](#) or [Sign Up](#) to download the printable version of this worksheet

D gallon



a driveway



Which weighs **least**?

A



C



(b)

B



D



Which is **tallest**?

A

door

B

table

C

house

D

window

(c)

