



Name _____ Class _____ Date _____

1

tens	ones
4	9
+	1
?	?

- A 40 C 50
B 59 D 95

2 Jake has 30 cents. He earns 45 cents. How much money does he have now?

- A 75 cents
B 15 cents
C 48 cents
D 70 cents



3 Chris had 24 marbles. He bought 13 more. How many marbles does Chris have in all?

- A 36 marbles
B 35 marbles



tens	ones
2	4
+	1
	3

4 On Saturday there was a race. There were 15 adults and 44 children in the race. How many people were in the race?

- A 44
B 15

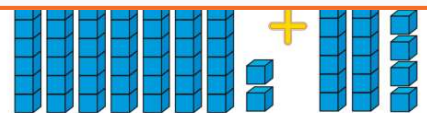
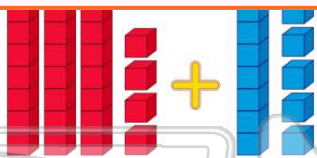
$15 + 44 =$



PREVIEW

Please [Sign In](#) or [Sign Up](#) to download the printable version of this worksheet

- B 94
C 21
D 13



- A true B false

9 Robert collects coins. He has 58 coins. His mom gave him 11 more. How many coins are in his collection?

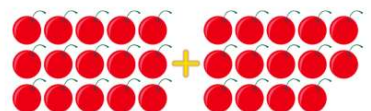
- A 69 coins
B 68 coins
C 47 coins
D 96 coins

tens	ones
5	8
+	1
	1



10 Shaza ate 15 cherries for breakfast. At snack she ate 14 more cherries. Did Shaza eat more or less than 30 cherries?

- A more
B less





ANSWER KEY

	tens	ones
	4	9
+	1	0
	?	?

- A** 40 **C** 50
B 59 **D** 95

(b)

Jake has 30 cents. He earns 45 cents. How much money does he have now?



(a)

- A** 75 cents
B 15 cents
C 48 cents
D 70 cents



Chris had 24 marbles. He bought 13 more. How many marbles does Chris have in all?

- A** 36 marbles
B 35 marbles
C 37 marbles



	tens	ones
	2	4
+	1	3

(c)

On Saturday there was a race. There were 15 adults and 44 children in the race. How many people were in the race?

- A** 44
B 15
C 49

$$15 + 44 =$$



(d)



PREVIEW

Please [Sign In](#) or [Sign Up](#) to download the printable version of this worksheet

- C** 21
D 13



- A** true **B** false

Robert collects coins. He has 58 coins. His mom gave him 11 more. How many coins are in his collection?

- A** 69 coins
B 68 coins
C 47 coins
D 96 coins

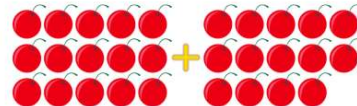
	tens	ones
	5	8
+	1	1



(a)

Shaza ate 15 cherries for breakfast. At snack she ate 14 more cherries. Did Shaza eat more or less than 30 cherries?

- A** more
B less



(b)