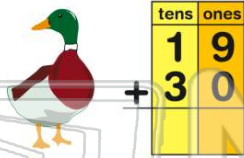




Name \_\_\_\_\_ Class \_\_\_\_\_ Date \_\_\_\_\_

1 Sue counted 19 ducks at the pond in the morning. She counted 30 ducks in the pond after lunch. How many ducks did Sue count that day?

- A 39 ducks
- B 29 ducks
- C 30 ducks
- D 49 ducks



2 Ice cream bars cost 35¢. Popsicles cost 40¢. How much does it cost to buy one ice cream bar and one popsicle?

- A 35¢
- B 45¢
- C 75¢
- D 70¢



3  $81 + 16 =$  \_\_\_\_\_

- A 79
- B 77
- C 97
- D 88



4 Mrs. Carter's class has 35 students. Mr. Soto's class has 23 students. There are \_\_\_\_\_ students in both classes combined.

- A 55
- C 76



5



## PREVIEW

Please [Sign In](#) or [Sign Up](#) to download the printable version of this worksheet

7

- A 48
- B 37
- C 23
- D 36



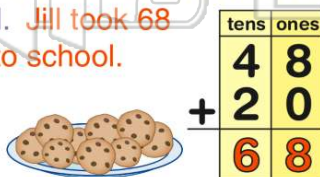
- A 48 miles
- B 42 miles
- C 84 miles
- D 6 miles



9

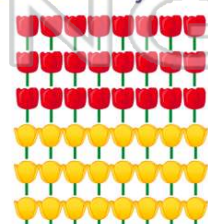
Jill's mom made 48 cookies on Monday. She made 20 more on Tuesday. Jill took all the cookies to school. Jill took 68 cookies to school.

- A true
- B false



10 Mark plants 48 tulips. He planted 24 red tulips. The rest are yellow. How many tulips are yellow?

- A 23 tulips
- B 20 tulips
- C 24 tulips
- D 48 tulips





## ANSWER KEY

Sue counted 19 ducks at the pond in the morning. She counted 30 ducks in the pond after lunch. How many ducks did Sue count that day?

- A 39 ducks
- B 29 ducks
- C 30 ducks
- D 49 ducks



tens	ones
1	9
3	0

(d)

Ice cream bars cost 35¢. Popsicles cost 40¢. How much does it cost to buy one ice cream bar and one popsicle?

- A 35¢
- B 45¢
- C 75¢
- D 70¢

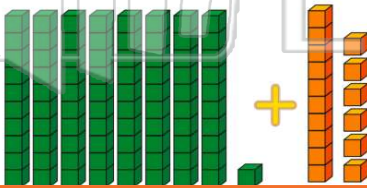


$$\begin{array}{r} 35¢ \\ + 40¢ \\ \hline \end{array}$$

(c)

$$81 + 16 = \square$$

- A 79
- B 77
- C 97
- D 88



(c)

Mrs. Carter's class has 35 students. Mr. Soto's class has 23 students. There are \_\_\_\_\_ students in both classes combined.

- A 55
- B 53
- C 76
- D 58

tens	ones
3	5
2	3

(d)



## PREVIEW

Please [Sign In](#) or [Sign Up](#) to download the printable version of this worksheet

- A 48
- B 37
- C 23
- D 36



tens	ones
1	1

(a)

- B 42 miles
- C 84 miles
- D 6 miles



tens	ones
4	2

(c)

Jill's mom made 48 cookies on Monday. She made 20 more on Tuesday. Jill took all the cookies to school. Jill took 68 cookies to school.

- A true
- B false



tens	ones
4	8
2	0
6	8

Mark plants 48 tulips. He planted 24 red tulips. The rest are yellow. How many tulips are yellow?

- A 23 tulips
- B 20 tulips
- C 24 tulips
- D 48 tulips

