




Name _____ Class _____ Date _____

1 Nate cut a pie into thirds. He ate $\frac{2}{3}$.
How much was not eaten?




- A $\frac{3}{1}$ B $\frac{3}{2}$ C $\frac{1}{3}$ D $\frac{1}{2}$

3 A dime is $\frac{1}{10}$ of \$1.00.




2 One fourth is not shaded.

- A true
B false



4 How much is not shaded?



PREVIEW

Please [Sign In](#) or [Sign Up](#) to download the printable version of this worksheet

7



- A $\frac{1}{4}$ B $\frac{1}{3}$ C $\frac{1}{2}$ D $\frac{1}{8}$

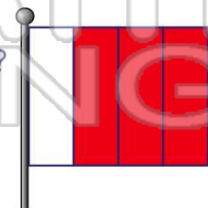
9 There are six animals. What part of the group are kittens?



- A $\frac{1}{5}$ B $\frac{1}{6}$ C $\frac{5}{6}$ D $\frac{1}{3}$

- A $\frac{4}{5}$ B $\frac{1}{4}$ C $\frac{1}{5}$ D $\frac{1}{2}$

10 How much of the flag is not shaded?




- A $\frac{1}{8}$ B $\frac{1}{10}$ C $\frac{1}{4}$ D $\frac{3}{4}$



ANSWER KEY


Nate cut a pie into thirds. He ate $\frac{2}{3}$.
How much was not eaten?



(C)

- A $\frac{3}{1}$ B $\frac{3}{2}$ C $\frac{1}{3}$ D $\frac{1}{2}$

One fourth is not shaded.



(a)

- A true
B false

A dime is $\frac{1}{10}$ of \$1.00.



(a)

How much is not shaded?



(b)

- A true



PREVIEW

Please [Sign In](#) or [Sign Up](#) to download the printable version of this worksheet

- A $\frac{1}{4}$ B $\frac{1}{3}$ C $\frac{1}{2}$ D $\frac{1}{8}$

There are six animals. What part of the group are kittens?

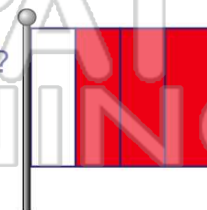


(b)

- A $\frac{1}{5}$ B $\frac{1}{6}$ C $\frac{5}{6}$ D $\frac{1}{3}$

- A $\frac{4}{5}$ B $\frac{1}{4}$ C $\frac{1}{5}$ D $\frac{1}{2}$

How much of the flag is not shaded?



(c)

- A $\frac{1}{8}$ B $\frac{1}{10}$ C $\frac{1}{4}$ D $\frac{3}{4}$