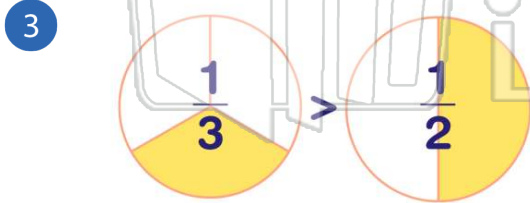
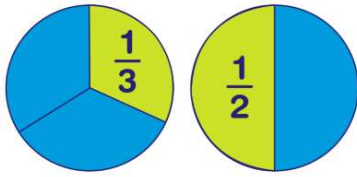




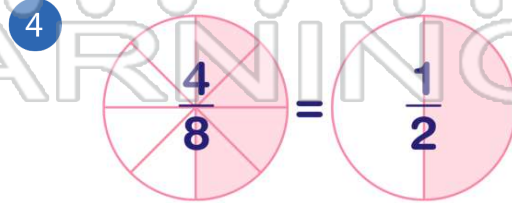
Name _____ Class _____ Date _____

1 Which is **more**?



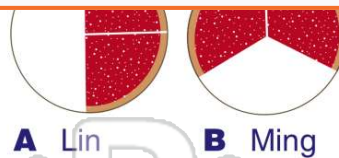
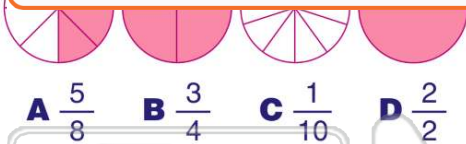
2 Jane loves cake. She always takes the **larger** piece. Would she take $\frac{2}{3}$ of a cake or $\frac{1}{2}$ of a cake?

A $\frac{2}{3}$ B $\frac{1}{2}$




PREVIEW

7 Please [Sign In](#) or [Sign Up](#) to download the printable version of this worksheet



9 Mark had $\frac{2}{3}$ of his crayons left. Ken had $\frac{1}{2}$ of his crayons left. Who had **fewer** crayons left?



10 There was $\frac{1}{2}$ of an apple pie and $\frac{1}{5}$ of a sweet potato pie. Which pie had **more** left?

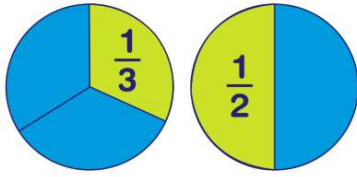
A apple pie
B sweet potato pie





ANSWER KEY

Which is **more**?

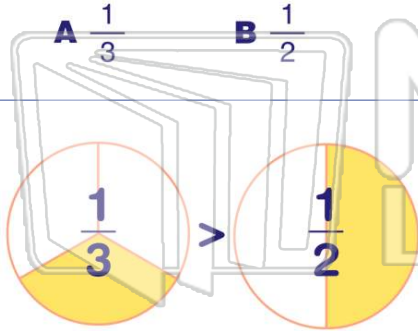


(b)

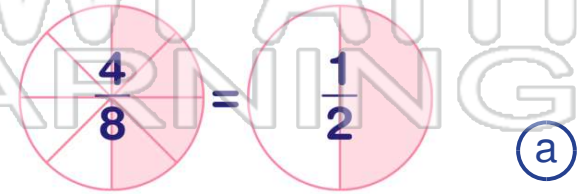
Jane loves cake. She always takes the **larger** piece. Would she take $\frac{2}{3}$ of a cake or $\frac{1}{2}$ of a cake?

(a)

A $\frac{2}{3}$ B $\frac{1}{2}$



(b)



(a)

A true

A true



PREVIEW

Please [Sign In](#) or [Sign Up](#) to download the printable version of this worksheet

A $\frac{5}{8}$ B $\frac{3}{4}$ C $\frac{1}{10}$ D $\frac{2}{2}$

A Lin B Ming

Mark had $\frac{2}{3}$ of his crayons left.
Ken had $\frac{1}{2}$ of his crayons left.
Who had **fewer** crayons left?

(b)

There was $\frac{1}{2}$ of an apple pie and $\frac{1}{5}$ of a sweet potato pie.
Which pie had **more** left?

(a)



A Mark B Ken

A apple pie
B sweet potato pie

