



Name _____ Class _____ Date _____

1 How many **more** students came to school on **Tuesday**?

- A 21
- B 17
- C 4
- D $17 + 21$

Day	# of Students
Monday	#########
Tuesday	############

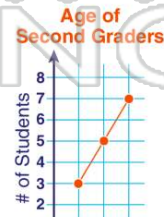
2 How many people made **more than 7 baskets**?

- A 3
- B 6
- C 4
- D 13



4 How many **more** students are **8 years old than 7 years old**?

- A 8
- C 15



3 **Most** people have **no** pets.

- A true
- B false



PREVIEW

Please [Sign In](#) or [Sign Up](#) to download the printable version of this worksheet

football	●●●●●●●●	Log Ride	Log Ride	###
basketball	●●●●●●●●	Merry-Go-Round		
		Pirate Ride		

- A 10
- B 5
- C 13
- D 8

9 How many **more** orange leaves than yellow leaves are there?

- A $8 + 2 =$
- B $8 - 2 =$
- C $8 - 6 =$
- D $2 - 8 =$

Color of Leaves	
red	###
yellow	//
orange	###



10 Ben and Sara saw **more** dogs than squirrels.

- A true
- B false





ANSWER KEY

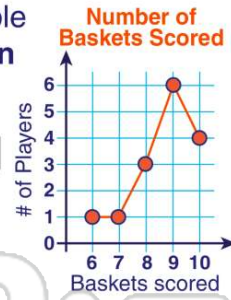
How many **more** students came to school on **Tuesday**?

	Day	# of Students
A	Monday	#########//
B	Tuesday	############/
C		
D		17 + 21

(c)

How many people made **more than 7 baskets**?

- A** 3
- B** 6
- C** 4
- D** 13



(d)

Most people have **no** pets.

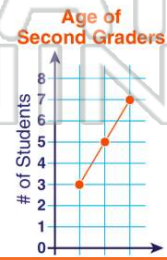
- A** true
- B** false



(a)

How many **more** students are **8 years old than 7 years old**?

- A** 8
- B** 2
- C** 15
- D** 7



(b)



PREVIEW

Please [Sign In](#) or [Sign Up](#) to download the printable version of this worksheet

basketball

- A** 10
- B** 5
- C** 13
- D** 8

- C** Merry-Go-Round
- D** Pirate Ride

How many **more** orange leaves than yellow leaves are there?

- A** $8 + 2 =$
- B** $8 - 2 =$
- C** $8 - 6 =$
- D** $2 - 8 =$

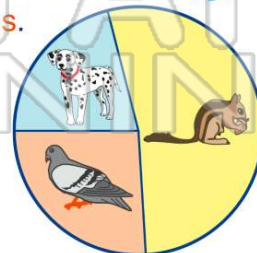
Color of Leaves	
red	###/
yellow	//
orange	###///



(b)

Ben and Sara saw **more** dogs than squirrels.

- A** true
- B** false



(b)