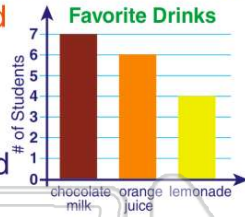




Name \_\_\_\_\_ Class \_\_\_\_\_ Date \_\_\_\_\_

1 Do more people like chocolate milk or lemonade and orange juice together?



- A lemonade and orange juice
- B chocolate milk

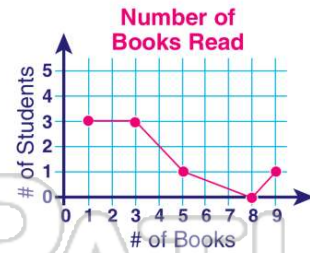
3 How many cars are there in our neighborhood?



- A 6
- B 2
- C 19

2 No one read 8 or 9 books.

- A true
- B false



4 Twice as many people like cotton candy as snow cones.

- A true
- B false

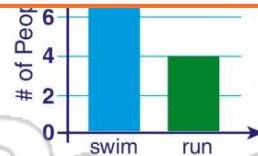
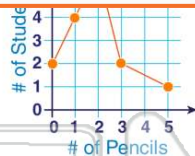


5

**PREVIEW**

7 Please [Sign In](#) or [Sign Up](#) to download the printable version of this worksheet

- A 1
- B 3
- C 0
- D 4



9 How many more people like apple pie and banana pie than cherry pie?

- A  $20 - 7 =$
- B  $12 - 7 =$
- C  $15 - 12 =$
- D  $19 - 8 =$

Favorite Pie	# of votes
apple	###
cherry	###
banana	###

10 List the favorite colors in order from least to greatest.

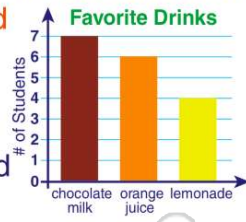
- A red, blue, orange
- B orange, red, blue
- C orange, blue, red
- D red, orange, blue

Favorite Color	# of votes
blue	////
red	###
orange	///



## ANSWER KEY

Do **more** people like **chocolate milk** or **lemonade and orange juice** together?

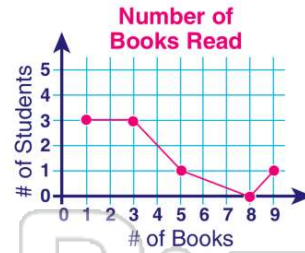


(a)

- A lemonade and orange juice
- B chocolate milk

No one read **8 or 9** books.

- A true
- B false



(b)

How many **cars** are there in our neighborhood?

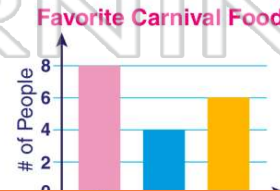


(c)

- A 6
- B 2
- C 19
- D 20

Twice as many people like **cotton candy** as **snow cones**.

- A true
- B false



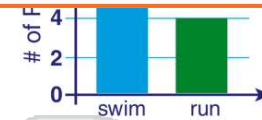
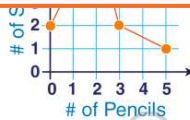
(a)



## PREVIEW

Please [Sign In](#) or [Sign Up](#) to download the printable version of this worksheet

- B 3
- C 0
- D 4



How many **more** people like **apple pie** and **banana pie** than **cherry pie**?

- A  $20 - 7 =$
- B  $12 - 7 =$
- C  $15 - 12 =$
- D  $19 - 8 =$

Favorite Pie	# of votes
apple	###//
cherry	#######//
banana	####//

(c)

List the **favorite colors** in order from **least to greatest**.

- A red, blue, orange
- B orange, red, blue
- C orange, blue, red
- D red, orange, blue

Favorite Color	# of votes
blue	////
red	###//
orange	//

(c)