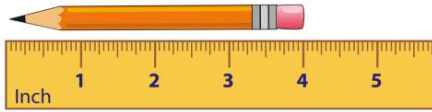




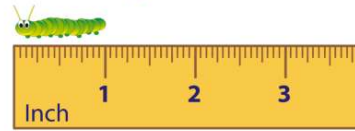
Name \_\_\_\_\_ Class \_\_\_\_\_ Date \_\_\_\_\_

1 The **pencil** is \_\_\_\_\_ inches **long**.



- A 5
- B  $4\frac{1}{2}$
- C 4
- D 3

2 How **long** is the **inchworm**?



- A 3 inches
- B 2 inches
- C 1 inch
- D  $2\frac{1}{2}$  inches

3 About how long is a **crayon**?

- A 4 inches
- B 4 feet
- C 14 inches
- D 14 feet



4 A paper clip is **1 inch** long. How many paper clips are in **1 foot**?

- A 12
- B 6
- C 1



## PREVIEW

Please [Sign In](#) or [Sign Up](#) to download the printable version of this worksheet

7

- B 4 inches
- C  $3\frac{1}{2}$  inches
- D  $4\frac{1}{2}$  inches

- B 3
- C 2
- D 1

2 pints = 1 quart



9 Jeremy wants to make **2 quarts** of fruit punch. How many **cups** of juice does Jeremy need?

- A 2 cups
- B 4 cups
- C 6 cups
- D 8 cups



10 Sara has **2 cups** of apple juice for lunch. How many **pints** of apple juice does Sara have?

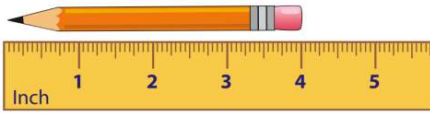
- A 1 pint
- B 2 pints
- C 3 pints
- D 4 pints





## ANSWER KEY

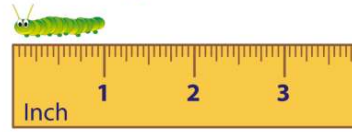
The **pencil** is \_\_\_\_ inches **long**.



(C)

- A 5
- B  $4\frac{1}{2}$
- C 4
- D 3

How **long** is the **inchworm**?



(C)

- A 3 inches
- B 2 inches
- C 1 inch
- D  $2\frac{1}{2}$  inches

About how long is a **crayon**?

- A 4 inches
- B 4 feet
- C 14 inches
- D 14 feet



(a)

A paper clip is **1 inch** long. How many paper clips are in **1 foot**?

- A 12
- B 6
- C 1
- D 36



(a)

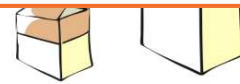


## PREVIEW

Please [Sign In](#) or [Sign Up](#) to download the printable version of this worksheet

- C  $3\frac{1}{2}$  inches
- D  $4\frac{1}{2}$  inches

- C 2
- D 1



2 pints = 1 quart

Jeremy wants to make **2 quarts** of fruit punch. How many **cups** of juice does Jeremy need?

- A 2 cups
- B 4 cups
- C 6 cups
- D 8 cups



(d)

Sara has **2 cups** of apple juice for lunch. How many **pints** of apple juice does Sara have?

- A 1 pint
- B 2 pints
- C 3 pints
- D 4 pints



(a)