



Name _____ Class _____ Date _____

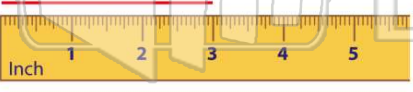
1 A **ruler** is _____ inches long.

A 36
B 12
C 100
D 40



3 How **long** is the **line**?

A 2 inches
B 6 inches

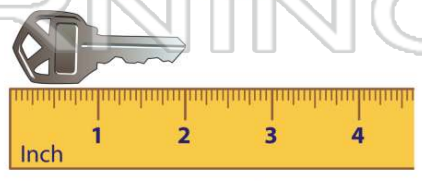


2 A **glue stick** is about how many inches **long**?

A 12 inches
B 10 inches
C 1 inch
D 3 inches



4 How **long** is the **key**?



PREVIEW


7 Please [Sign In](#) or [Sign Up](#) to download the printable version of this worksheet

A 4
B $5\frac{1}{2}$
C $4\frac{1}{2}$
D 3

9 How many **cups** are the same as **1 quart**?

A 1 cup
B 2 cups
C 3 cups
D 4 cups

2 pints = 1 quart
1 pint = 2 cups




B 2 pints
C 3 pints
D 4 pints

10 Beth's mixing bowl holds 2 quarts. How many **pints** are the same as **2 quarts**?

A 2 pints
B 4 pints
C 6 pints
D 8 pints

1 pint = 2 cups

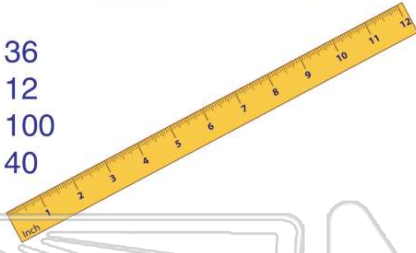




ANSWER KEY

A **ruler** is ____ inches long.

- A** 36
- B** 12
- C** 100
- D** 40



(b)

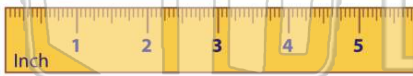
A **glue stick** is about how many inches long?

- A** 12 inches
- B** 10 inches
- C** 1 inch
- D** 3 inches



(d)

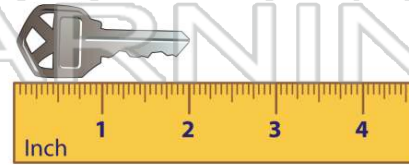
How **long** is the **line**?



- A** 2 inches
- B** 6 inches
- C** 3 inches

(c)

How **long** is the **key**?



(b)

- A** 3 inches
- C** 1 inch

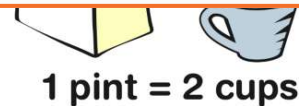


PREVIEW

Please [Sign In](#) or [Sign Up](#) to download the printable version of this worksheet

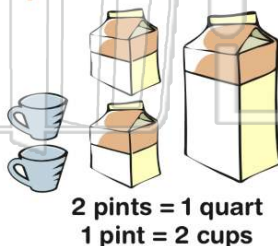
- A** 4
- B** $5\frac{1}{2}$
- C** $4\frac{1}{2}$
- D** 3

- C** 3 pints
- D** 4 pints



How many **cups** are the same as **1 quart**?

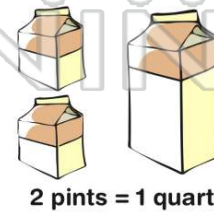
- A** 1 cup
- B** 2 cups
- C** 3 cups
- D** 4 cups



(d)

Beth's mixing bowl holds 2 quarts. How many **pints** are the same as **2 quarts**?

- A** 2 pints
- B** 4 pints
- C** 6 pints
- D** 8 pints



(b)