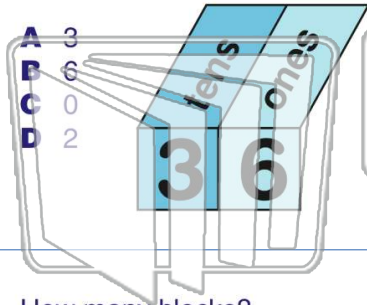




Name _____ Class _____ Date _____

1 Which digit is in the **ones place**?



2 What is the **highest digit** you can write in the **ones place**?

- A 10
- B 1
- C 9
- D 0

3 How many blocks?



4 How many blocks?



PREVIEW

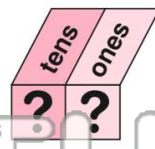
Please [Sign In](#) or [Sign Up](#) to download the printable version of this worksheet

7 tens and ones is the **underlined digit**?

- A nine
- B nineteen
- C nine hundred
- D ninety



- A 9 tens and 4 ones
- B 4 tens and 9 ones
- C 9 tens and 4 tens
- D 49 tens and 0 ones



9 tens and 0 ones is the **same as** ones.

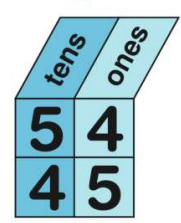
- A 70
- B 71
- C 7
- D 700



10 Which number is **greater**?

54 or **45**

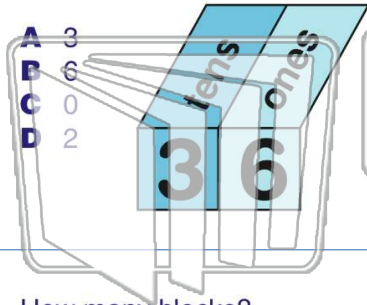
- A 54
- B 45





Name _____ Class _____ Date _____

1 Which digit is in the **ones place**?



2 What is the **highest digit** you can write in the **ones place**?

- A 10
- B 1
- C 9
- D 0

3 How many blocks?



4 How many blocks?

- A 8



PREVIEW

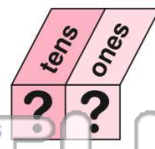
Please [Sign In](#) or [Sign Up](#) to download the printable version of this worksheet

7 _____ tens and _____ ones is the **underlined digit**?

- A nine
- B nineteen
- C nine hundred
- D ninety



- A 9 tens and 4 ones
- B 4 tens and 9 ones
- C 9 tens and 4 tens
- D 49 tens and 0 ones



9 _____ tens and 0 ones is the **same as** 70 ones.

- A 70
- B 71
- C 7
- D 700



10 Which number is **greater**?

54 or 45

- A 54
- B 45

