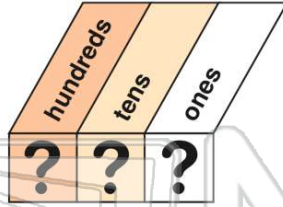




Name _____ Class _____ Date _____

1 How do you write the number **two hundred two**?

- A 220
- B 202
- C 2,002
- D 222



2 In the number **409**, the **nine** is in the _____ place.

- A tens
- B hundreds
- C nines
- D ones



3 What is the **greatest digit** you can put in the **hundreds place**?

- A 0
- B 9
- C 1



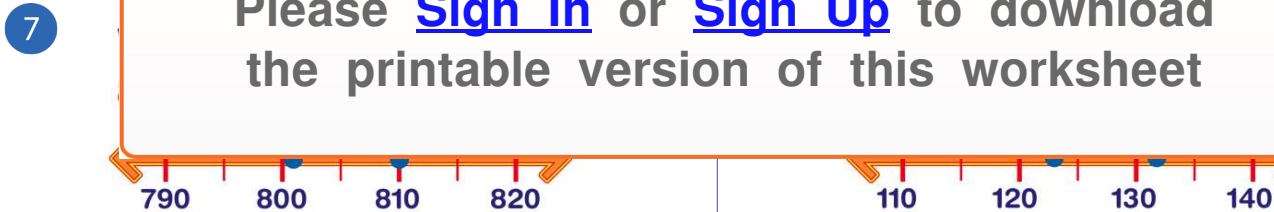
4 Which is **greater**?
9 tens 7 ones or **7 tens 9 ones**

- A 9 tens 7 ones
- B 7 tens 9 ones



PREVIEW

Please [Sign In](#) or [Sign Up](#) to download the printable version of this worksheet

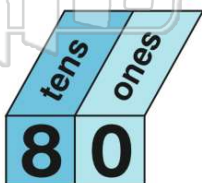


- A 810
- B 801

- A 132
- B 123

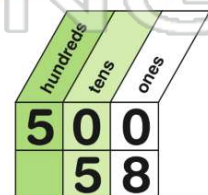
9 These numbers are the **same**:
8 tens 0 ones or **eighty**

- A true
- B false



10 Which is **less**?
5 hundred or **5 tens 8 ones**

- A 5 hundred
- B 5 tens 8 ones

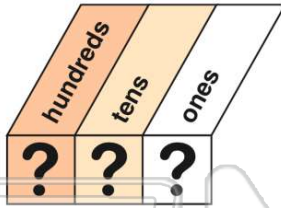




ANSWER KEY

How do you write the number **two hundred two**?

- A 220
- B 202
- C 2,002
- D 222



(b)

In the number **409**, the **nine** is in the _____ place.

- A tens
- B hundreds
- C nines
- D ones



(d)

What is the **greatest digit** you can put in the **hundreds place**?

- A 0
- B 9
- C 1
- D 5

HUNDREDS?

(b)

Which is **greater**?

9 tens 7 ones or **7 tens 9 ones**

- A 9 tens 7 ones
- B 7 tens 9 ones



(a)



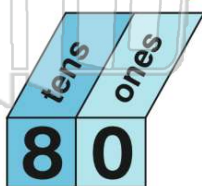
PREVIEW

Please [Sign In](#) or [Sign Up](#) to download the printable version of this worksheet

- A 810
- B 801

These numbers are the **same**:
8 tens 0 ones or **eighty**

- A true
- B false



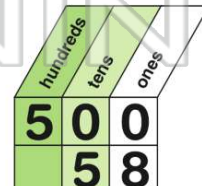
(a)

- A 132
- B 123

Which is **less**?

5 hundred or **5 tens 8 ones**

- A 5 hundred
- B 5 tens 8 ones



(b)