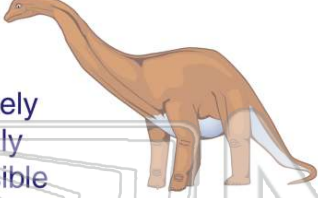





Name _____ Class _____ Date _____

1 How **certain** is it?
You will see a living dinosaur at the park.



A certain
B very likely
C not likely
D impossible

2 Six cookies are in a bag: 1 chocolate chip, 3 oatmeal, and 2 peanut butter. Without looking, which cookie are you **most likely** to pick out?




A chocolate chip
B a brownie
C peanut butter
D oatmeal

3 There are 3 pizzas: one pepperoni, one cheese, and one mushroom. Someone gives you a piece. Which kind of pizza is it **most likely** to be?



A pepperoni
B mushroom
C cheese
D mushroom

4 How **certain** is it?
A snake will walk.



A certain
B very likely
C not likely
D impossible

5



PREVIEW

Please [Sign In](#) or [Sign Up](#) to download the printable version of this worksheet

6 brown or black?




A brown
B black

7

A peach C apple
B plum D pear



9 Where is the spinner **least likely** to land?



A shaded part
B not shaded part

10 There are 12 kids in a class: 8 boys, 4 girls. Without choosing, are you **more likely** to sit near a boy or a girl?



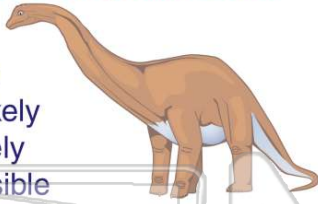
A girl
B boy



ANSWER KEY

How **certain** is it?

You will see a living dinosaur at the park.



- A certain
- B very likely
- C not likely
- D impossible

(d)

Six cookies are in a bag: 1 chocolate chip, 3 oatmeal, and 2 peanut butter. Without looking, which cookie are you **most likely** to pick out?



- A chocolate chip
- B a brownie
- C peanut butter
- D oatmeal

(d)

There are 3 pizzas: one pepperoni, one cheese, and one mushroom. Someone gives you a piece. Which kind of pizza is it **most likely** to be?



- A pepperoni
- B mushroom
- C cheese
- D

(d)

How **certain** is it?

A snake will walk.



- A certain
- B very likely
- C not likely
- D

(d)



PREVIEW

Please [Sign In](#) or [Sign Up](#) to download the printable version of this worksheet

- A brown
- B black



- A peach
- B plum
- C apple
- D pear



Where is the spinner **least likely** to land?



- A shaded part
- B not shaded part

(b)

There are 12 kids in a class: 8 boys, 4 girls. Without choosing, are you **more likely** to sit near a boy or a girl?



- A girl
- B boy

(b)