




Name _____ Class _____ Date _____

1 Order the coins from **least to greatest** value.



A quarter, nickel, penny, dime
B penny, nickel, dime, quarter
C dime, penny, nickel, quarter
D nickel, penny, dime, quarter

2 Which class has the **most** students?

Class	Students
Mrs. Green	28
Mrs. Doll	21
Mr. Martin	31
Miss Corson	19

A Mrs. Doll's
B Mr. Martin's
C Mrs. Green's
D Miss Corson's

3 What number is **missing**?

286 287 ? 289 290

A 286 **C** 288
B 278 **D** 297

4 **Start on 421. Count back 4.**

A 421, 418, 419
B 421, 420



5



PREVIEW





Please [Sign In](#) or [Sign Up](#) to download the printable version of this worksheet

7

A 291, 311 **C** 300, 320
B 280, 320 **D** 280, 311

A 189 **C** 191
B 198 **D** 182

9 **542 and ten more** is _____

A  **C** 
B  **D** 

10 Four students ran a race. Using the chart, put the students in order from **fastest to slowest**.

Name	Minutes
Akil	240
Aden	244
Gloria	236
Monica	237

A Gloria, Monica, Akil, Aden
B Aden, Akil, Monica, Gloria
C Aden, Gloria, Monica, Akil
D Akil, Monica, Gloria, Aden



ANSWER KEY

Order the coins from **least to greatest** value.



- A** quarter, nickel, penny, dime
- B** penny, nickel, dime, quarter
- C** dime, penny, nickel, quarter
- D** nickel, penny, dime, quarter

(b)

Which class has the **most** students?

Class	Students
Mrs. Green	28
Mrs. Doll	21
Mr. Martin	31
Miss Corson	19

- A** Mrs. Doll's
- B** Mr. Martin's
- C** Mrs. Green's
- D** Miss Corson's

(b)

What number is **missing**?

286 287 ? 289 290

- A** 286
- B** 278
- C** 288
- D** 297

(c)

Start on 421.
Count **back** 4.

- A** 421, 418, 419
- B** 421, 420
- C** 421, 420, 419, 418

(c)



PREVIEW

Please [Sign In](#) or [Sign Up](#) to download the printable version of this worksheet

- A** 291, 311
- B** 280, 320
- C** 300, 320
- D** 280, 311

- B** 198
- D** 182

542 and **ten more** is _____.

- A**
- B**
- C**
- D**

(d)

Four students ran a race. Using the chart, put the students in order from **fastest to slowest**.

Name	Minutes
Akil	240
Aden	244
Gloria	236
Monica	237

- A** Gloria, Monica, Akil, Aden
- B** Aden, Akil, Monica, Gloria
- C** Aden, Gloria, Monica, Akil
- D** Akil, Monica, Gloria, Aden

(a)