



Name \_\_\_\_\_ Class \_\_\_\_\_ Date \_\_\_\_\_

1 Complete the pattern.

A 7  
B 8  
C 9  
D 5

2 When you count by 2s starting on 2, will you ever land on an odd number?

A yes  
B no

3 Skip count by 5s to 25.

4 Pencils come in packs of 5. If you buy 4 packs, how many pencils will you have?

**PREVIEW**

Please [Sign In](#) or [Sign Up](#) to download the printable version of this worksheet

7

A 10, 20, 30, 40, 50  
B 10, 25, 50  
C 10, 15, 20, 25, 30, 40, 50  
D 50, 40, 30, 20, 10

count odd and even numbers.

A true  
B false

9 Jared is counting by threes starting on 3. Will he land on 23?

A yes  
B no

10 What number are you counting by?

15 18 21 24 27

A 18  
B 2  
C 4  
D 3

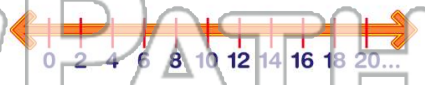


Name \_\_\_\_\_ Class \_\_\_\_\_ Date \_\_\_\_\_

1 Complete the pattern.

A 7  
B 8  
C 9  
D 5

2 When you count by 2s starting on 2, will you ever land on an odd number?



- A yes
- B no

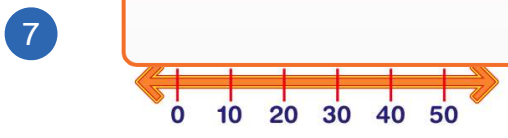
3 Skip count by 5s to 25.

4 Pencils come in packs of 5. If you buy 4 packs, how many pencils will you have?



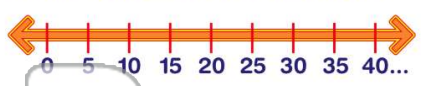
**PREVIEW**

Please [Sign In](#) or [Sign Up](#) to download the printable version of this worksheet



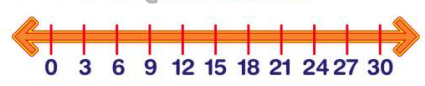
- A 10, 20, 30, 40, 50
- B 10, 25, 50
- C 10, 15, 20, 25, 30, 40, 50
- D 50, 40, 30, 20, 10

count odd and even numbers.



- A true
- B false

9 Jared is counting by threes starting on 3. Will he land on 23?



- A yes
- B no

10 What number are you counting by?



- A 18
- B 2
- C 4
- D 3