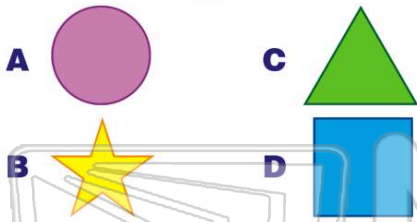




Name _____ Class _____ Date _____

1 Which of these shapes could be the **face** of a **cylinder**?



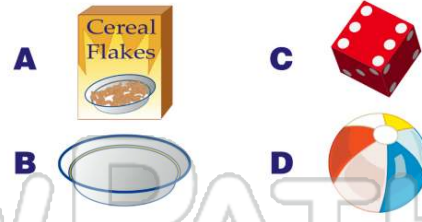
3 I do not roll. I have **5 faces**. One of my faces is a **square**.

What am I?

- A cone
- B pyramid



2 Which of these objects is shaped like a **cube**?



4 You can stack me. I have **no vertices**. I have **two faces**.

What am I?

- A cylinder
- B cone



5



PREVIEW

7 Please [Sign In](#) or [Sign Up](#) to download the printable version of this worksheet

- A sphere
- B hemisphere
- C cylinder
- D cone



9 Which of these **solids** can be **stacked**?

- A sphere
- B cone
- C cylinder
- D pyramid



10 A **basketball** is shaped like a _____.

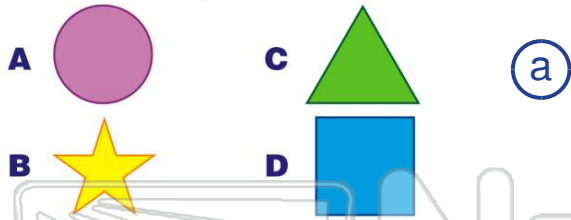
- A cone
- B cylinder
- C cube
- D sphere





ANSWER KEY

Which of these shapes could be the **face** of a **cylinder**?



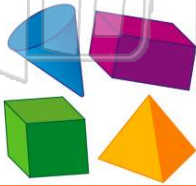
Which of these objects is **shaped like a cube**?



I do **not** roll. I have **5 faces**. One of my faces is a **square**.

What am I?

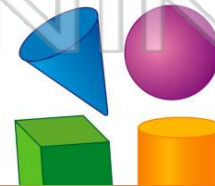
- A** cone
B pyramid
C cube



You can **stack** me. I have **no vertices**. I have **two faces**.

What am I?

- A** cylinder
B cone
C sphere



PREVIEW


Please [Sign In](#) or [Sign Up](#) to download the printable version of this worksheet

- B** hemisphere
C cylinder
D cone



Which of these **solids** can be **stacked**?

- A** sphere
B cone
C cylinder
D pyramid



A **basketball** is shaped like a

- A** cone
B cylinder
C cube
D sphere

