




Name \_\_\_\_\_ Class \_\_\_\_\_ Date \_\_\_\_\_

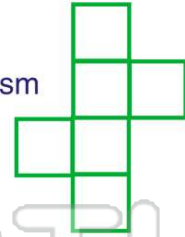
1 A box of crayons is the shape of a **rectangular prism**.

- A true
- B false



2 What **solid** can you make from this pattern?

- A rectangular prism
- B pyramid
- C cube
- D sphere



3 What **solid** figure is a part of the **milk carton**?

- A cylinder
- B pyramid
- C cube



4 How many **cubes** are in the tower?

- A 20
- B 15
- C 10



## PREVIEW

7 Please [Sign In](#) or [Sign Up](#) to download the printable version of this worksheet

- B 6
- C 12
- D 8

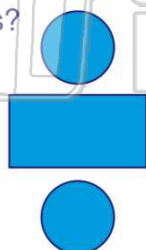


- B false



9 Which **solid** can you make with these shapes?

- A cone
- B sphere
- C pyramid
- D cylinder



10 Could you make a **cube** with this pattern?

- A yes
- B no






## ANSWER KEY

A box of crayons is the shape of a **rectangular prism**.

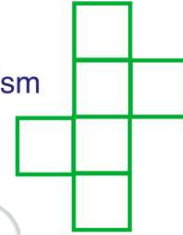
- A true
- B false



(a)

What **solid** can you make from this pattern?

- A rectangular prism
- B pyramid
- C cube
- D sphere



(c)

What **solid** figure is a part of the **milk carton**?

- A cylinder
- B pyramid
- C cube
- D rectangular prism



(d)

How many **cubes** are in the tower?

- A 20
- B 15
- C 10
- D 1



(c)



## PREVIEW

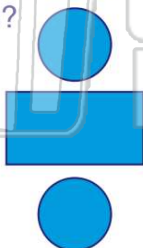
Please [Sign In](#) or [Sign Up](#) to download the printable version of this worksheet

- C 12
- D 8



Which **solid** can you make with these shapes?


- A cone
- B sphere
- C pyramid
- D cylinder



(d)

Could you make a **cube** with this pattern?

- A yes
- B no



(b)