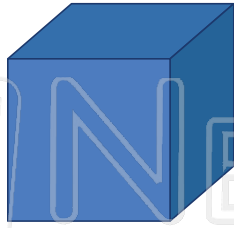




Name _____ Class _____ Date _____

1 How many **faces** are on a **cube**?




6 What **3D solid** can you make with this shape?




2 A **pyramid** is made up of **triangles** and a _____.




7 Most solid figures have **length, width** and _____.



3 Which of _____ of a **cylinder** _____



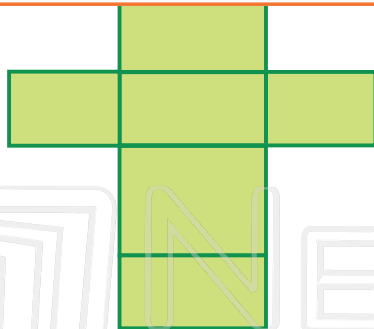
_____ shaped like





PREVIEW

Please [Sign In](#) or [Sign Up](#) to download the printable version of this worksheet

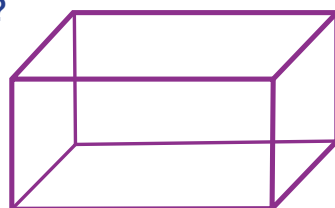
4 What **solid** you make from this **pattern**?




_____ stacked.



5 How many **vertices** are on a **rectangular prism**?



10 How many **cubes** are in this **block**?





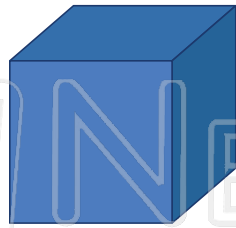
Solids - Answer Key

Math
B

Name _____ Class _____ Date _____

1 How many **faces** are on a **cube**?

6



6 What **3D solid** can you make with this shape?


cone




2 A **pyramid** is made up of **triangles** and a **square**.



7 Most solid figures have **length, width** and **height**.




3 Which of these is shaped like a cylinder?



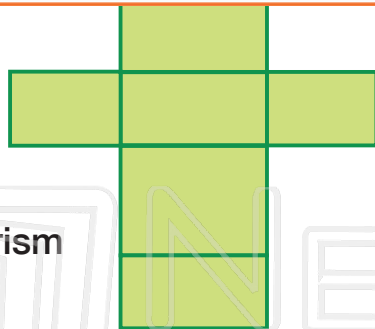
PREVIEW

Please [Sign In](#) or [Sign Up](#) to download the printable version of this worksheet




_____ is shaped like



4 What solid can you make from this **pattern**?



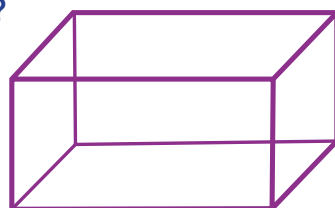
rectangular prism



_____ are stacked.

5 How many **vertices** are on a **rectangular prism**?

8



10 How many **cubes** are in this **block**?

12

