



Name _____ Class _____ Date _____

1 Alex had 17 pennies in his pocket. There was a hole in his pocket and 5 pennies fell out. How many pennies were left in his pocket?

- A 17 C 23
B 5 D 12



tens	ones
1	7
	5
	?

3 Luis' mom said he could play outside until 6:00. He went out to play at 1:00. How long did Luis play outside?



4 James invited 20 kids to his birthday party. Thirteen kids came. How many kids did not come?

- A 2 C 14
B 16 D 12



tens	ones
2	0
1	3

- A 13
B 7



PREVIEW

Please [Sign In](#) or [Sign Up](#) to download the printable version of this worksheet

7

A 11:30
B 11:00
C 10:30
D 10:00

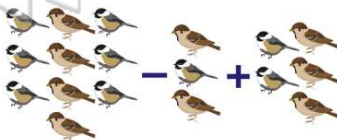


- A 3 hours
B 4 hours
C 1 hour
D 11 hours



9 There were 10 birds on a fence. Three flew away. Then 5 landed on the fence. Now there are 18 birds on the fence.

- A true
B false



10 The football game started at 1:30. The game ended at 4:30. How long was the game?

- A 4 hours
B 1 hour
C 2 hours
D 3 hours

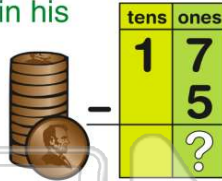




ANSWER KEY

Alex had 17 pennies in his pocket. There was a hole in his pocket and 5 pennies fell out. How many pennies were left in his pocket?

- A 17 C 23
B 5 D 12



(d)

Mina picked 8 daisies. Then she picked 6 roses. She put all the flowers in a vase.

There were _____ flowers in the vase.

- A 2 C 14
B 16 D 12



(c)

Luis' mom said he could play outside until 6:00. He went out to play at 1:00. How long did Luis play outside?

- A 6 hours C 5 hours



(c)

James invited 20 kids to his birthday party. Thirteen kids came. How many kids did not come?

- A 13
B 7
C 33



(b)



PREVIEW

Please [Sign In](#) or [Sign Up](#) to download the printable version of this worksheet

- B 11:00
C 10:30
D 10:00

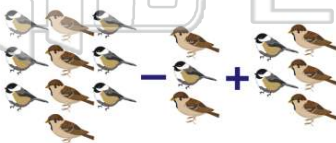


- B 4 hours
C 1 hour
D 11 hours



There were 10 birds on a fence. Three flew away. Then 5 landed on the fence. Now there are 18 birds on the fence.

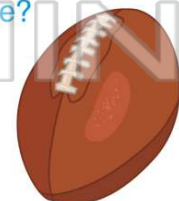
- A true
B false



(b)

The football game started at 1:30. The game ended at 4:30. How long was the game?

- A 4 hours
B 1 hour
C 2 hours
D 3 hours



(d)