



Name _____ Class _____ Date _____

1 Yasmin had 15 dollars. She spent 7 dollars at the mall. How much money does Yasmin have now?

- A 7 dollars
- B 9 dollars
- C 8 dollars
- D 15 dollars

| tens | ones |
|------|------|
| 1 | 5 |
| - | 7 |
| | ? |




3 There are 17 girls and 8 boys in Ben's class. How many more girls than boys are in Ben's class?

- A 25 more
- B 8 more

| tens | ones |
|------|------|
| 1 | 7 |
| | 8 |

2 Sue has 16 gumballs. She shares 9 gumballs with her sister. How many gumballs does Sue have left?

- A 7
- B 9
- C 16
- D 25



4 At the park 11 kids are swinging. Some kids jump off. Now 9 kids are swinging. How many kids jumped off?

- A 9
- C 11



5



PREVIEW

Please [Sign In](#) or [Sign Up](#) to download the printable version of this worksheet

7

- A 2 hours and 15 minutes
- B 14 hours and 15 minutes
- C 5 hours and 15 minutes
- D 6 hours and 15 minutes

- A 13
- B 5
- C 9
- D 4



9

Amita and Akil went to the parade. Amita saw 7 horses. Akil saw 9 dogs. How many animals did they see?

- A 9
- B 16
- C 7
- D 2



10 There are 10 cookies on the plate. Rachel eats some. Now there are 4 cookies. How many cookies did Rachel eat?

- A 4
- B 10
- C 6
- D 7





ANSWER KEY

Yasmin had 15 dollars. She spent 7 dollars at the mall. How much money does Yasmin have now?

- A 7 dollars
- B 9 dollars
- C 8 dollars
- D 15 dollars


| tens | ones |
|------|------|
| 1 | 5 |
| - | 7 |
| | ? |



(C)

Sue has 16 gumballs. She shares 9 gumballs with her sister. How many gumballs does Sue have left?

- A 7
- B 9
- C 16
- D 25



(a)

There are 17 girls and 8 boys in Ben's class. How many more girls than boys are in Ben's class?

- A 25 more
- B 8 more
- C 9 more

| tens | ones |
|------|------|
| 1 | 7 |
| - | 8 |
| | |

(C)

At the park 11 kids are swinging. Some kids jump off. Now 9 kids are swinging. How many kids jumped off?

- A 9
- B 2
- C 11
- D 3



(b)



PREVIEW

Please [Sign In](#) or [Sign Up](#) to download the printable version of this worksheet


- A 2 hours and 15 minutes
- B 14 hours and 15 minutes
- C 5 hours and 15 minutes
- D 6 hours and 15 minutes

- A 13
- B 5
- C 9
- D 4



Amita and Akil went to the parade. Amita saw 7 horses. Akil saw 9 dogs. How many animals did they see?

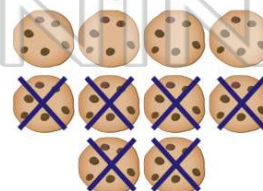
- A 9
- B 16
- C 7
- D 2



(b)

There are 10 cookies on the plate. Rachel eats some. Now there are 4 cookies. How many cookies did Rachel eat?

- A 4
- B 10
- C 6
- D 7



(c)