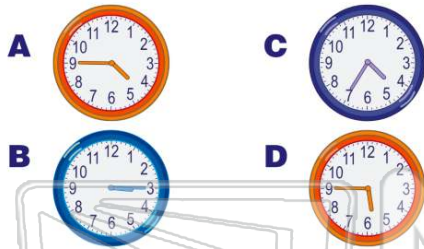





Name _____ Class _____ Date _____

1 Which clock shows **five forty-five**?



2 What will the clock look like a **half hour later**? 

A long hand will be on the three
 B long hand will be on the six
 C short hand will be on the six
 D short hand will be on the twelve

3 The bus picks you up **15 minutes past** eight thirty. **What time does the bus come?**

- A 8:15
- B 8:45



4 It is **fifteen minutes later** than the clock shows. **What is the new time?**

- A 9:30
- B 9:15



PREVIEW

7 Please [Sign In](#) or [Sign Up](#) to download the printable version of this worksheet

- B 7:45
- C 6:45
- D 7:25



- C 5:30
- D 5:03



9 What **time** is on the clock?

- A 9:00
- B 12:45
- C 12:15
- D 11:45



10 If the cartoon lasts for **thirty minutes** can you make it to the play?

- A yes
- B no

Activity	Time
cartoon	2:45
play	3:30



ANSWER KEY

Which clock shows **five forty-five**?



(d)

What will the clock look like a **half hour later**?



- A** long hand will be on the three
- B** long hand will be on the six
- C** short hand will be on the six
- D** short hand will be on the twelve

(b)

The bus picks you up **15 minutes past eight thirty**. What time does the bus come?

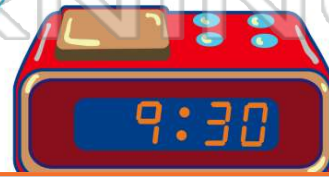
- A** 8:15
- B** 8:45
- C** 8:30



(b)

It is **fifteen minutes later** than the clock shows. What is the new time?

- A** 9:30
- B** 9:15
- C** 3:15



(d)



PREVIEW

Please [Sign In](#) or [Sign Up](#) to download the printable version of this worksheet

- C** 6:45
- D** 7:25



D 5:03



What time is on the clock?

- A** 9:00
- B** 12:45
- C** 12:15
- D** 11:45



(d)

If the cartoon lasts for **thirty minutes** can you make it to the play?

- A** yes
- B** no

Activity	Time
cartoon	2:45
play	3:30

(a)