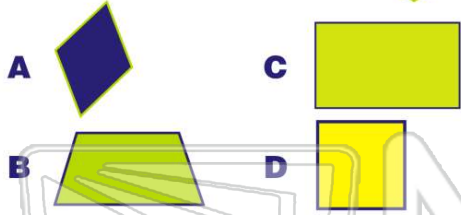




Name _____ Class _____ Date _____

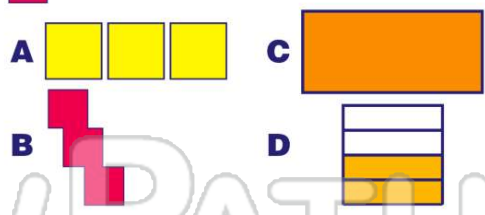
1 _____ is congruent with 



3  is congruent with _____.



2  is congruent with _____.



4  is congruent with _____.



PREVIEW

7 Please [Sign In](#) or [Sign Up](#) to download the printable version of this worksheet



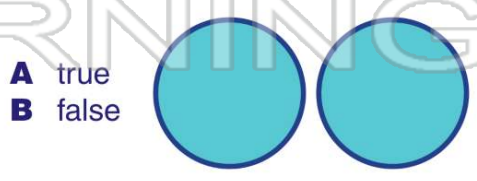
- C same size and shape
- D opposite shape

9 These two shapes are **congruent**.




- A true
- B false



10 These two shapes are **congruent**.










ANSWER KEY



_____ is congruent with 


A  **C**  **(a)**



B  **D** 



 is congruent with _____.


A  **C**  **(b)**



B  **D** 



 is congruent with _____.

A  **C**  **(a)**

B  **D** 

 is congruent with _____.



A  **C**  **(c)**

B  **D** 





PREVIEW

Please [Sign In](#) or [Sign Up](#) to download the printable version of this worksheet

B  **D** 



These two shapes are **congruent**.

  **(b)**

A true
B false

D opposite shape

These two shapes are **congruent**.

  **(a)**

A true
B false