




Name \_\_\_\_\_ Class \_\_\_\_\_ Date \_\_\_\_\_


1 Which would be the best to use when measuring the **length** of a pencil?

**A** feet  
**B** inches  
**C** yards  
**D** pounds



2 Which would be the best form of measurement to find the **length** of a football field?

**A** yards  
**B** miles  
**C** inches  
**D** feet




3 Travis has a large dog. His dog **weighs** 28 \_\_\_\_\_.

**A** grams  
**B** kilograms  
**C** milligrams



4 To find the **weight** of a person, \_\_\_\_\_ would be used.

**A** inches  
**B** yards  
**C** feet



## PREVIEW

7 Please [Sign In](#) or [Sign Up](#) to download the printable version of this worksheet

**B** pounds  
**C** gallons  
**D** pints




**A** feet  
**B** inches  
**C** miles  
**D** yards



9 The **length** of a garden hose would be measured in \_\_\_\_\_.

**A** miles  
**B** inches  
**C** feet  
**D** ounces



10 To find the **height** of your refrigerator, you would most likely use \_\_\_\_\_.

**A** inches  
**B** yards  
**C** miles  
**D** feet





## ANSWER KEY

Which would be the best to use when measuring the **length** of a pencil?



- A feet
- B inches
- C yards
- D pounds

(b)

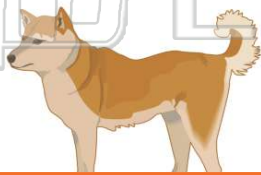
Which would be the best form of measurement to find the **length** of a football field?



- A yards
- B miles
- C inches
- D feet

(a)

Travis has a large dog. His dog **weighs** 28 \_\_\_\_\_.



- A grams
- B kilograms
- C milligrams
- D metric tons

(b)

To find the **weight** of a person, \_\_\_\_\_ would be used.



- A inches
- B yards
- C feet
- D pounds

(d)



## PREVIEW

Please [Sign In](#) or [Sign Up](#) to download the printable version of this worksheet

- C gallons
- D pints



- B inches
- C miles
- D yards



The **length** of a garden hose would be measured in \_\_\_\_\_.



- A miles
- B inches
- C feet
- D ounces

(c)

To find the **height** of your refrigerator, you would most likely use \_\_\_\_\_.



- A inches
- B yards
- C miles
- D feet

(d)