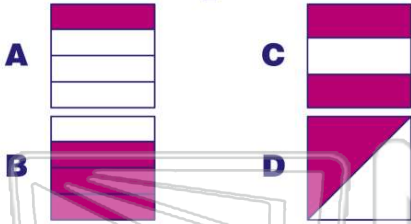




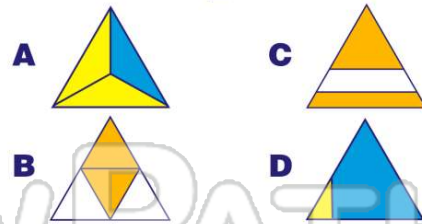
# Equivalent Fractions to 1/2

Name \_\_\_\_\_ Class \_\_\_\_\_ Date \_\_\_\_\_

1 Which shows  $\frac{1}{2}$  ?



2 Which shows  $\frac{1}{2}$  ?



3  shows  $\frac{1}{2}$ .

A true

4  shows  $\frac{1}{2}$ .

A true

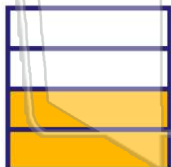


## PREVIEW

Please [Sign In](#) or [Sign Up](#) to download the printable version of this worksheet

A true  
B false

A  $\frac{12}{15}$  B  $\frac{12}{20}$  C  $\frac{12}{24}$  D  $\frac{12}{28}$

9  is equal to  $\frac{1}{2}$ .

A true  
B false

10  is equal to  $\frac{1}{2}$ .

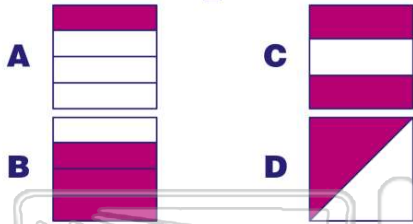
A true  
B false



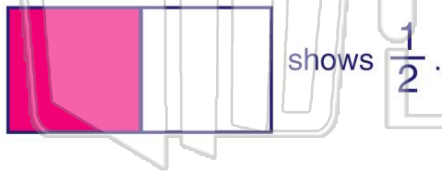
# Equivalent Fractions to 1/2

## ANSWER KEY

Which shows  $\frac{1}{2}$  ?

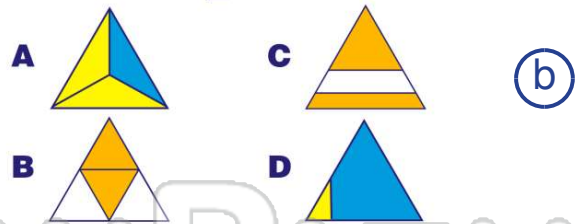


(d)



- A true
- B false

Which shows  $\frac{1}{2}$  ?



(b)



- A true
- B false

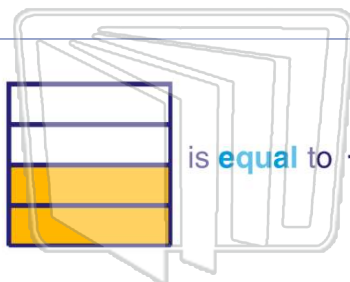
**PREVIEW**

Please [Sign In](#) or [Sign Up](#) to download the printable version of this worksheet

B false



- A  $\frac{12}{15}$
- B  $\frac{12}{20}$
- C  $\frac{12}{24}$
- D  $\frac{12}{28}$



- A true
- B false



- A true
- B false