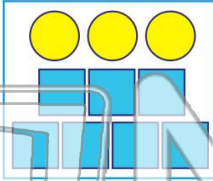





Name _____ Class _____ Date _____

1 What fraction shows how many in this group of shapes are squares?



A $\frac{3}{7}$ B $\frac{7}{3}$ C $\frac{7}{10}$ D $\frac{3}{10}$

2 The **empty** glass is $\frac{1}{4}$ of the whole. True or false?



A true B false

3 What fraction of the squares




4 What fraction shows how




PREVIEW


Please [Sign In](#) or [Sign Up](#) to download the printable version of this worksheet

7 4 bananas in the bowl. What fraction shows how many of all the fruit are strawberries?




A $\frac{4}{12}$ B $\frac{8}{4}$ C $\frac{8}{12}$ D $\frac{12}{8}$

8 How many of the balls are not red?



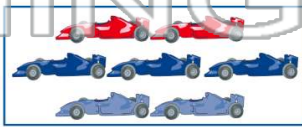
A $\frac{4}{7}$ B $\frac{3}{7}$ C $\frac{3}{4}$ D $\frac{4}{3}$

9 Which fraction shows how many of all the shapes are flowers?



A $\frac{5}{9}$ B $\frac{9}{5}$ C $\frac{9}{14}$ D $\frac{5}{14}$

10 Ben has two red cars, three blue cars, and two silver cars. What fraction of the cars is silver?



A $\frac{2}{5}$ B $\frac{2}{7}$ C $\frac{2}{3}$ D $\frac{2}{4}$



Name _____ Class _____ Date _____

1 What fraction shows how many in this group of shapes are squares?

A $\frac{3}{7}$ B $\frac{7}{3}$ C $\frac{7}{10}$ D $\frac{3}{10}$

2 The empty glass is $\frac{1}{4}$ of the whole. True or false?

A true B false

3 What fraction of the squares

4 What fraction shows how

5

PREVIEW

Please [Sign In](#) or [Sign Up](#) to download the printable version of this worksheet

7 4 bananas in the bowl. What fraction shows how many of all the fruit are strawberries?

A $\frac{4}{12}$ B $\frac{8}{4}$ C $\frac{8}{12}$ D $\frac{12}{8}$

8 How many of the balls are not red?

A $\frac{4}{7}$ B $\frac{3}{7}$ C $\frac{3}{4}$ D $\frac{4}{3}$

9 Which fraction shows how many of all the shapes are flowers?

A $\frac{5}{9}$ B $\frac{9}{5}$ C $\frac{9}{14}$ D $\frac{5}{14}$

10 Ben has two red cars, three blue cars, and two silver cars. What fraction of the cars is silver?

A $\frac{2}{5}$ B $\frac{2}{7}$ C $\frac{2}{3}$ D $\frac{2}{4}$