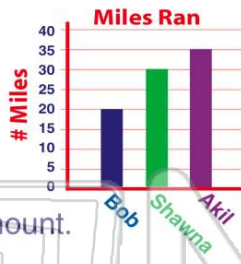




Name \_\_\_\_\_ Class \_\_\_\_\_ Date \_\_\_\_\_

1 Who ran the **most** miles?

- A Bob
- B Shawna
- C Akil
- D They all ran the same amount.



2 How many **fewer** miles did Bob run than Akil?

- A 45
- B 35
- C 25
- D 15



3 How many **fewer** people attended the fair on Thursday than on Sunday?

- A 100
- B 200



4 Jake, Erik, and Mathias all collect baseball cards. How many **more** cards does Erik have than Jake?

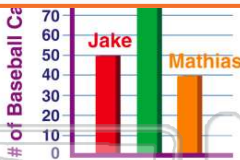
- A 30
- B 40



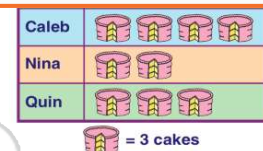
## PREVIEW

Please [Sign In](#) or [Sign Up](#) to download the printable version of this worksheet

- A 40
- B 50
- C 80
- D 170

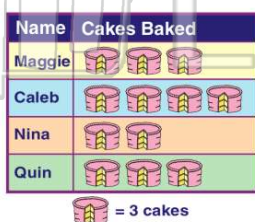


- C 6
- D 12



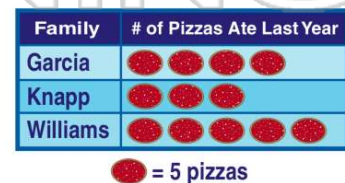
9 Who baked the **most** cakes?

- A Maggie
- B Caleb
- C Nina
- D Quin



10 How many **more** pizzas did the Williams family eat last year than the Garcia family?

- A 1
- B 4
- C 5
- D 10





## ANSWER KEY

Who ran the **most** miles?

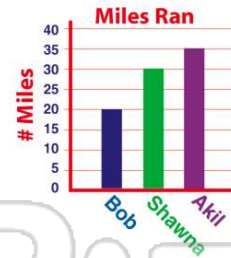
- A Bob
- B Shawna
- C Akil
- D They all ran the same amount.



(C)

How many **fewer** miles did Bob run than Akil?

- A 45
- B 35
- C 25
- D 15



(d)

How many **fewer** people attended the fair on Thursday than on Sunday?

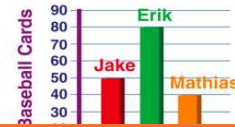
- A 100
- B 200
- C 300



(C)

Jake, Erik, and Mathias all collect baseball cards. How many **more** cards does Erik have than Jake?

- A 30
- B 40
- C 50



(a)



## PREVIEW

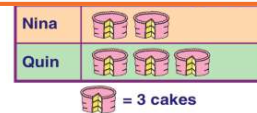
Please [Sign In](#) or [Sign Up](#) to download the printable version of this worksheet

- B 50
- C 80
- D 170



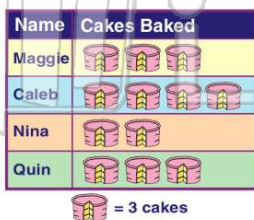
(d)

- D 12



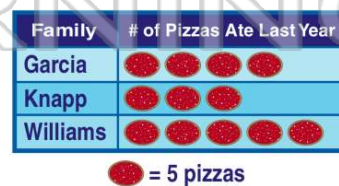
Who baked the **most** cakes?

- A Maggie
- B Caleb
- C Nina
- D Quin



How many **more** pizzas did the Williams family eat last year than the Garcia family?

- A 1
- B 4
- C 5
- D 10



(C)